

Question Bank

collection of model question papers

STANDARD-2



Publishers Pvt. Ltd.

IX/14-15, Kakkanad-Pallikkara Road, Athani, Kusumagiri.P.O., Kakkanad, Kochi-682 030

Phone : 0484-2429261, 3291869, 8594040422

E-mail: rainbowpublishers@ymail.com

Website: rainbowpublishersindia.com

FIRST TERMINAL EXAMINATION STANDARD - 2

Total marks
obtained
out of 50

ENGLISH

Part - A

Time : 2 hrs.
Marks : 50

(Write the answers in the question paper itself)

1. Tick the correct answer: 4

- a. It was a (defferent / different) kind of game.
- b. The players were (tired / tried) after the match.
- c. The little (mousse / mouse) nibbled at the cheese.
- d. The (clourful / colourful) birds flew everywhere.

2. Read the passage and answer the questions: 5

Sam lived on a farm and had a job to do. He had to wake up early everyday to feed the chickens and get their eggs. One morning Sam went outside to do his job. He reached down and got three eggs from the first chicken. He reached down and got two eggs from the second chicken. He reached down and felt a huge egg under the third chicken. He could not believe it. The egg felt strange. It was much bigger and heavier than the others. He looked at the chicken with surprise. Sam smiled and said, "So that's where my baseball went!"

- a. What two things did Sam do every morning?
.....
- b. How many eggs did Sam collect before he found the "strange egg"?
.....
- c. What funny thing happened in this story?
.....
- d. Write True or False:
 - (i) All the eggs were of the same size.
 - (ii) The eggs were from different chickens.

3. Fill in the blanks with 'some' 'any' or 'many': 4

- a. There are birds on the tree.
- b. We don't have holidays.
- c. I want more sugar in my coffee.
- d. people came for the match.

4. **Make 3 sentences with the given words. Do not repeat the words:** 3

Sonu	jumped	to the shop
We	read	on the swing
My mother and I	went	the lesson
The teacher	played	over the wall
The little children	taught	to school

- a.
- b.
- c.

5. **Fill in the blanks with words starting with “kn..” or “sh..”:** 3

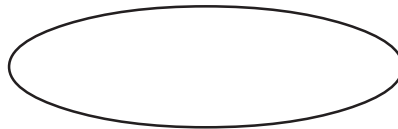
- a. You put this on your feet when you go to school
- b. You do this to make socks
- c. You cut fruits with this

6. **Write your answers in a sentence. Use ‘did’ or ‘didn’t’:** 4

- a. Did you do the homework, Akash? Yes,
- b. Did you take the sweets? No,

7. **Answer the questions in the bubble:** 4

- a. Where did you go for your vacation?
- b. What language do you speak at home?



8. **Put them in columns:** 3

play	tree	sing	table	knife	write
------	------	------	-------	-------	-------

Naming words

Doing words

- | | |
|-------|-------|
| | |
| | |
| | |

9. **Write whether True or False:** 4
- a. There were big elephants and baby elephants at the zoo.
 - b. Raju and Ravi were going to Hyderabad by plane.
 - c. The frog was the laziest of all the creatures in the house.
 - d. The monkey was showing off in front of the visitors.

10. **Draw a flower and write two sentences about it:** 3



.....
.....
.....
.....

11. **Answer the following:** 8

- a. Why did the hen not share the bread with her friends?
.....
.....
- b. Why did mother want to go back?
.....
.....
- c. How was the zoo in Hyderabad different from the other zoos?
.....
.....
- d. Who were the three friends in the poem 'The Little Red Hen'?
.....
.....

12. **Write five sentences on a visit to the zoo:** 5

.....
.....
.....

FIRST TERMINAL EXAMINATION STANDARD-2

Total marks
obtained
out of 50

Time : 2 hrs.
Marks : 50

മലയാളം

(ഉത്തരം ചോദ്യക്കടലാസിൽ തന്നെ എഴുതുക.)

1. സമാനപദം എഴുതുക: 4

മാനം = വർണം =

മധു = മന്നൻ =

2. ഒറ്റപ്പദം എഴുതുക: 3

ജോലിചെയ്യാൻ താൽപര്യമില്ലാത്തവൻ =

സത്യം പാലിക്കുന്നവൻ =

3. അനുയോജ്യമായവ വരച്ച് യോജിപ്പിച്ച് അതിനെ ചേർത്തെഴുതുക: 6

ഉള്ളിൽ കരഞ്ഞു

മാവ് ഒതുക്കി

ഉറക്കം കതിർ

പൊട്ടി ചോട്ടിൽ

നെൽഉണർന്നാൽ

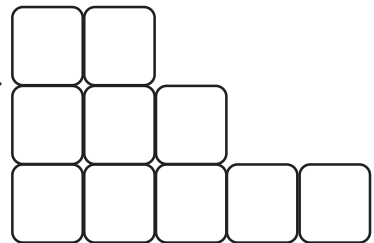
4. കൂസൂതി ചോദ്യത്തിന്റെ ഉത്തരം എഴുതുക: 3

(ചക്ക, തേങ്ങ, മഞ്ചാടിക്കൂരു, ചിലന്തി)

a. കണ്ണോളം വെള്ളമുണ്ട്, മുങ്ങാൻ തികയില്ല.

b. നൂൽനൂൽക്കും ഞാൻ വിൽക്കാറില്ല,
വലവീശും ഞാൻ മൂക്കുവനല്ല.

c. കാട്ടിലുണ്ടൊരിരു ചോര.



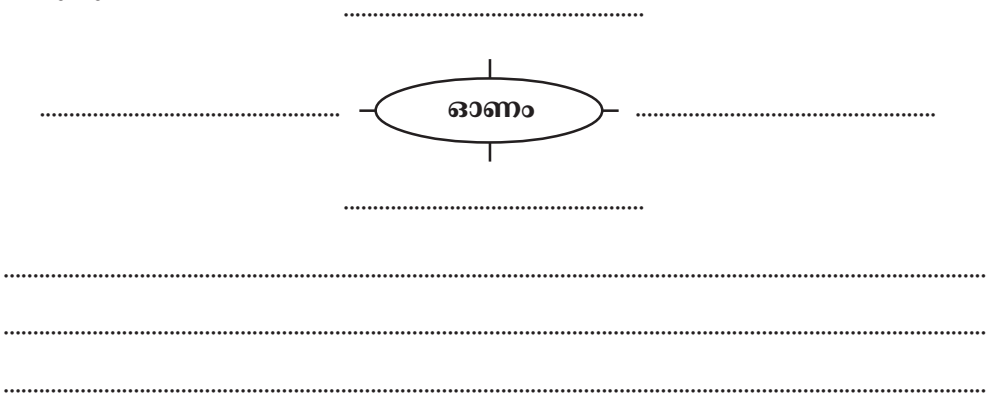
5. ശരിയായ സംയുക്താക്ഷരം '✓' ചെയ്യുക: 2

a. ഹ് + ഉ - ഹ്ഉ ഹൂ b. ന് + ദ - നു ന

c. സ് + മ - സമ സ്മ d. ക് + ഉ - കൂ ക്കു

6. ശബ്ദം ആരുടേത്? (പൂച്ച, പട്ടി, കാക്ക, പൂവൻകോഴി, തവള, ആട്) 3
- ക്രോം ക്രോം - മ്യാവു മ്യാവു -
- ഭ്രൂ ഭ്രൂ - കാ കാ -
- മോ മോ - കൊക്കരക്കോ കോ -

7. പദസൂര്യൻ പൂർത്തിയാക്കി ഓണത്തെക്കുറിച്ച് 3 വാക്യങ്ങളിൽ കുറയാതെ എഴുതുക: 5



PART - B

(ഉത്തരങ്ങൾ വേറെ പേപ്പറിൽ എഴുതേണ്ടതാണ്)

8. ഒറ്റവാക്കിൽ ഉത്തരം എഴുതുക: 9
- a. അച്ഛൻ മകളെ പ്രോത്സാഹിപ്പിച്ചത് എന്ത് എഴുതി ഉണ്ടാക്കാനാണ്?
 - b. മഹാത്മാഗാന്ധിയുടെ പേര് എന്ത്?
 - c. കേരളത്തിന്റെ കലാരൂപം ഏത്?
 - d. ഖാദർ ആരായിരുന്നു?
 - e. കേരളത്തിന്റെ പടിഞ്ഞാറുഭാഗത്തുള്ള കടൽ ഏത്?
 - f. മഹാബലി വരുമ്പോൾ ശ്രീലത എന്തു കൊടുക്കും?
9. കളിപ്പത്രത്തിൽ എഴുതാൻ ഒരു കവിത എഴുതുക. അല്ലെങ്കിൽ 'മാവേലി വന്നാൽ' എന്ന കവിതയിൽനിന്നും നിങ്ങൾക്കിഷ്ടപ്പെട്ട നാലു വരികൾ ക്രമമായി എഴുതുക. 4
10. ഉത്തരം എഴുതുക:
- a. ഉണ്ണിയുടെ ചേച്ചിയ്ക്ക് പായസം ഉണ്ടാക്കാൻ എന്തെല്ലാം വേണമെന്നറിയില്ല. പായസത്തിന് വേണ്ട സാധനങ്ങളുടെ ലിസ്റ്റ് എഴുതി കൊടുക്കുക. 3
 - b. മോഹൻദാസ് തന്റെ കടമയായി കരുതിയത് എന്ത്? 3
 - c. കഴുത കാളയെ ഉപദേശിച്ചത് എന്ത്? 3
11. കളിപ്പത്രത്തിൽ ചേർക്കാൻ ഒരു ചിത്രം വരച്ച് തലക്കെട്ട് എഴുതുക. 2

**FIRST TERMINAL EXAMINATION
STANDARD - 2**

Total marks
obtained
out of 50

MATHS

Part - A

Time : 2 hrs.
Marks : 50

(Write the answers in the question paper itself)

1. Write the numerals: 2

- a. One hundred and twenty six -
- b. Four hundred and eight -
- c. Six hundred and fifty five -
- d. Five hundred and thirty -

2. Write in words: 4

- a. 422 -
- b. 181 -
- c. 500 -
- d. 701 -

3. Draw the number of flowers to show addition: 4

a. $5 + 4 = \dots\dots\dots$


b. $3 + 7 = \dots\dots\dots$

4. Write in tens: 2

140, 150,,,,

5. Count in threes and draw the balls:

3



6. Add:

4

$25 +$	$428 +$	$348 +$	$26 +$
36	122	431	44
_____	_____	_____	_____
=====	=====	=====	_____
			10

			=====

7. Subtract:

4

$67 -$	$54 -$	$87 -$	$96 -$
46	39	64	51
_____	_____	_____	_____
=====	=====	=====	=====

8. Match the following:

4

- | | |
|---|---|
| a. 202 | 90 |
| b. $45 + 45$ | 0 |
| c. $45 - 45$ | $300 + 20 + 1$ |
| d. 321 | $200 + 0 + 2$ |

9. Write in expanded form:

4

- a. $822 - \dots\dots\dots$
- b. $641 - \dots\dots\dots$

10. Fill in the blanks with greater than, lesser than, equal to signs:

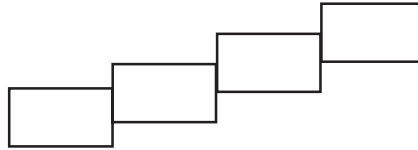
4

$67 \dots\dots\dots 67$ $85 \dots\dots\dots 90$ $43 \dots\dots\dots 34$ $69 \dots\dots\dots 71$

11. Put in ascending order:

14, 9, 25, 36

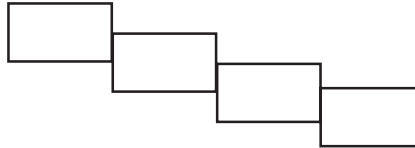
2



12. Put in descending order:

84, 77, 75, 92

2



13. Join the dots from 401 to 430 and name the animal:

5



PART - B

(Use separate answer sheets to write the answers)

14. 506 boys and 785 girls use the school bus every term. How many students use the school bus every term? **3**
15. Ramesh got 88 marks for English, 97 marks for maths and 92 marks for science. How many marks did he get for the three subjects together? **3**

FIRST TERMINAL EXAMINATION STANDARD - 2

Total marks
obtained
out of 50

SCIENCE

Time : 2 hrs.
Marks : 50

Part - A

(Write the answers in the question paper itself)

1. Name the part of the plant that is used as food: 3



.....

2. Put in the correct column: 3

peas	tomato	wheat	radish	beetroot	apple
------	--------	-------	--------	----------	-------

Seed

Root

Fruit

3. From what are these made: 4



.....

4. Find the jumbled word: 2

a. Dead leaves, flowers and stem when mixed with the soil form
E N A M R U.

b. P A E L D T O grows to become frog.

5. Match the following: 2

perfumes

oil

groundnut

cocoa

gum

flowers

chocolate

tree

6. Fill in the blanks correctly:

4

insects desert trees medicine

- a. Tall and strong plants are called
- b. Cactus grows in the
- c. Frogs and lizards eat
- d. Tulsi plant gives us

7. Name the following:

5

- a. A plant that grows in water. -
- b. An animal that lives both in water and on land. -
- c. A thing that you can make with coconut plant fibre. -
- d. A plant that stores food in its leaves. -
- e. A seed from which you can get oil for cooking. -

8. How do these move? Write two animals for each. Do not repeat:

3



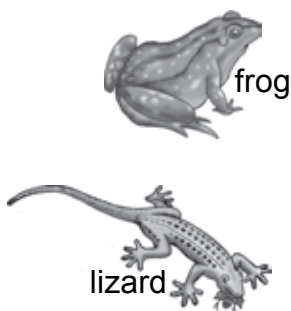
duck



snake



man



frog

lizard



cow

walk

crawl

swim

.....

.....

.....

.....

.....

.....

9. Write whether creeper, tree or shrub:

3

- shoeflower - mango -
- coconut - money plant -
- pumpkin - rose -

- 10. Answer the following questions with 'yes' or 'no':** **4**
- a. We eat the leaves of the spinach plant. -
 - b. We get coffee from cows. -
 - c. The pine tree grows in cold places. -
 - d. All living things can move. -

- 11. Draw a line connecting adult and baby:** **3**



PART - B

(Use separate answer sheets to write the answers)

- 12. Answer the following:** **8**
- a. Why do some plants need support?
 - b. Give two uses of plants.
 - c. Why is a plant called a living thing?
 - d. Give two characters of shrubs.
- 13. Draw one thing you can make out of wood.** **3**
- 14. Draw your favourite fruit and colour it.** **3**

FIRST TERMINAL EXAMINATION STANDARD - 2

Total marks
obtained
out of 50

SOCIAL STUDIES

Time : 2 hrs.
Marks : 50

Part - A

(Write the answers in the question paper itself)

1. Connect the item and the place:

3



2. Choose the correct answer:

4

- a. At home / school teachers teach us to read and write.
- b. The confectioner / grocer sells rice, wheat etc.
- c. A permanent / temporary house is not strong.
- d. Families and houses form neighbours / neighbourhoods.

3. Write whether true or false:

2

- a. Village dispensaries treat the sick.
- b. A bank is not a safe place to keep money.
- c. Tents are made of bricks and stone.
- d. Policemen help to control traffic.

4. Find the word:

4

- a. We go to the S H M I C E T to buy medicines.
- b. I study in a big O H L S C O.
- c. U N S W O G B A L are independent houses.
- d. We park vehicles in a E G A R A G.

5. Tick places in your neighbourhood:

4













6. Match the following:

2

baker

learn manners

houseboat

wheels

school

biscuit

caravan

Kerala

7. Name the picture:

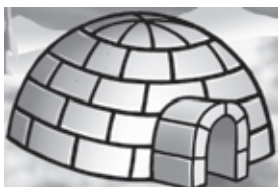
4



.....



.....



.....



.....

8. Fill in the blanks:

5

parcels vaccination valuables share taught trained

- Teachers are specially to teach the students.
- Babies are given to prevent illness.
- We can keep our in a bank.
- You can send from a post office.
- All flats common facilities.

9. **Tick the things the postman does:** 1½

- The postman drops the letter into the postbox.
- He sorts the letters according to the address.
- He delivers letters and parcels.
- He writes the address on the letters.
- The postman collects the letters from the post box.

10. **What do they do? (write two sentences for each):** 6

- a. Bank :
-
-
- b. Firemen :
-
-

11. **Circle the odd word:** 4½

- a. doctors nurses books medicines
- b. railway station airport stadium house
- c. window hut igloo bungalow

PART - B

(Use separate answer sheets to write the answers)

12. **Answer the following:** 8

- a. What do policemen do to help us?
- b. What were the first houses made of?
- c. How do doctors help us?
- d. Name three items you can buy at the market.

13. **Draw a hut and colour it :** 2

SECOND TERMINAL EXAMINATION STANDARD - 2

Total marks
obtained
out of 50

ENGLISH

Part - A

Time : 2 hrs.
Marks : 50

(Write the answers in the question paper itself)

1. Fill in the blanks with the past tense of the words in brackets: 4

- a. I.....(read) all the lessons at night.
- b. They (give) us all their toys to play with.
- c. The children..... (follow) the piper to the cave.
- d. My parents..... (buy) a new cycle for me.

2. What are these words beginning with 'cl'?4



cl..... cl..... cl..... cl.....

3. Complete the sentences with 'There is' or 'There are': 4

- a.five birds on the tree.
- b.a dog in front of the house.
- c.a cap on his head.
- d.twenty children sitting in the class.

4. Use 'he', 'she', 'them' in the blanks: 4

- a. I have a new teacher.teaches very well.
- b. I know Mr. and Mrs. Das. I metlast week.
- c. My brother is in class 10.is the leader of his class.
- d. Mrs. Sharma is a doctor.works in a big hospital.

5. Write a rhyming word for each: 3

- a. tick -
- b. wet -
- c. boy -
- d. same -

- 6. Use ‘-un’ and write the opposite:** **2**
- a. The tall man standing there is very (kind)
 - b. We must the door and go inside. (lock)
 - c. He was very with the answer. (happy)
 - d. We must not keep the classroom (tidy)

- 7. Write the sentences with the plural of underlined words:** **4**
- a. My friend went to buy the book.
.....
 - b. I saw the man carrying the blue bag.
.....

- 8. Choose the words from the box and complete:** **4**
- | | | | |
|------|-----|-----|-----|
| deer | bat | fox | dog |
|------|-----|-----|-----|

- a. As blind as a
- b. As swift as a
- c. As cunning as a
- d. As faithful as a

- 9. Find the part of the body:** **3**
- a. There are ten EOST on my feet.
 - b. I fell down on my SEKEN.
 - c. She has a beautiful ECAF.

- 10. Match the meaning:** **5**
- | | |
|---|---|
| <ul style="list-style-type: none"> a. Happily b. Reward c. Shimmer d. Herd e. Closed | <ul style="list-style-type: none"> Shut Group Joyfully Shine Prize |
|---|---|

11. Read and tick the correct answer:

5

First Airplane Trip

Jake is going on a trip. He and Mom take a taxi to the airport. "It's my first plane trip," he tells the taxi driver. "That's great!" the taxi driver says. Jake rolls his suitcase onto the plane. "It's my first plane trip", he tells the pilot. "Welcome aboard, the pilot says. Jake finds his seat and buckles his seatbelt. The plane's engines rumble and roar. Jake opens his backpack and pulls out Panda. "It's my first plane trip," he whispers.

a. How does Jake and his mom travel to the airport?

in a bus

in a taxi

b. What does a pilot do?

flies the plane

drives a car

c. What does the pilot say to Jake?

Hello!

Welcome aboard !

d. Who is Panda?

Jake's brother

a stuffed animal

e. What does Jake whisper to Panda?

That's great !

It's my first plane trip!

Part - B

(Use separate answer sheets to write the answers)

12. Answer these questions:

8

a. Why did the villagers offer five hundred gold coins as reward?

b. What did Nehru want for India?

c. How did the piper kill the rats?

d. What does the crest on the peacock's head look like?

SECOND TERMINAL EXAMINATION STANDARD-2

Total marks
obtained
out of 50

Time : 2 hrs.
Marks : 50

മലയാളം

(ഉത്തരം ചോദ്യക്കടലാസിൽ തന്നെ എഴുതുക.)

1. സമാനപദം എഴുതുക: 4

സന്തോഷം = ദുഷ്ടി =
കിളിച്ചത് = കൊഴിയുക =

2. ഒറ്റപ്പദം എഴുതുക: 3

a. കത്തിക്കാൻ ഉപയോഗിക്കുന്ന വസ്തു =
b. ഉപയോഗമില്ലാത്ത ചെടി =

3. മാതൃകനോക്കി എഴുതുക: 3

ഴ് + ച - ള്ച - താഴ്ച ക് + ഷ - -
ന് + ധ - - സ് + ന - -

4. വിട്ടുപോയ അക്ഷരം ചേർത്തെഴുതുക: (ഗ, ങ, ഭ, ക്ഷ) 3

വ്യ.....ൻ ച.....ാതി അ.....രം സാ.....രം

5. ചേർത്തെഴുതുക: 3

ഒളിച്ചു + ഇരിക്കുന്നത് =
ഓടണം + എങ്കിൽ =
തടഞ്ഞു + അപ്പോൾ =

6. പദസൂര്യൻ പൂർത്തിയാക്കി കാടിനെക്കുറിച്ച് രണ്ടു വാക്യങ്ങൾ എഴുതുക: 4

.....

.....

.....

.....

7. കളത്തിലെ പദങ്ങൾ ക്രമപ്പെടുത്തി 5 വാക്യങ്ങൾ നിർമ്മിക്കുക:

5

വിശപ്പ്	മൂലം	കളി മുടങ്ങി
പല്ലുവേദന		മരങ്ങൾ ഉണങ്ങി
മഴ		ക്ലാസ്സ് മുടങ്ങി
സമരം		ഉറങ്ങാൻ കഴിഞ്ഞില്ല
കുടുംബ്		കുഞ്ഞ് കരഞ്ഞു

PART - B

(ഉത്തരങ്ങൾ വേറെ പേപ്പറിൽ എഴുതേണ്ടതാണ്.)

8. അക്ഷരകളത്തിൽ നിന്ന് ഉത്തരം കണ്ടെത്തി എഴുതുക:

10

- a. ഒരു ജലവാഹനം.
- b. കഴുതയുടെ കുട്ടുകാരൻ.
- c. കത്തുകൾ കൊണ്ടു വരുന്ന ആൾ.
- d. 'ഊർജ്ജം' സമാനപദം.
- e. കുഞ്ഞിന് തികളെ കാട്ടുന്നതാര്?
- f. വൃദ്ധന് എത്ര മക്കൾ?
- g. വെള്ളരിയിൽ എന്താണ് കായ്ച്ചത്?
- h. ആകാശമാർഗ്ഗം സഞ്ചരിക്കുന്ന വാഹനം.
- i. നയനമോൾക്ക് കത്തയച്ചത് ആര്?
- j. വാഹനം ഓടിക്കാൻ ഉപയോഗിക്കുന്ന ഒരു ഇന്ധനം.

കു	ട	അ	ച്ച	ൻ	വി
വ	നാ	ല്	ക	കു	മാ
ഉ	അ	മ്മ	പ്പ	റു	നം
യ്	ഡീ	സ	ൽ	ക്ക	ശ
ക്കാ	പോ	സ്സു	മാ	ൻ	ക്തി

9. 'കോഴിക്കുഞ്ഞ്' എന്ന നാടൻ പാട്ടിൽനിന്ന് നാലുവരികൾ എഴുതുക:

4

10. ഉത്തരം എഴുതുക:

- a. 'ചതിയനായ ചങ്ങാതി' എന്ന കഥയുടെ ഗുണപാഠം എന്ത് ? **3**
- b. കർഷകൻ കളിമണ്ണിനോട് എന്താണ് ചോദിച്ചത്? **3**
- c. പിതാവിന് മക്കൾ എന്ത് ഉറപ്പാണ് നൽകിയത്? **3**
- d. എത്ര മണി മുതൽ എത്ര മണി വരെയാണ് സ്കൂൾ പ്രവർത്തിക്കുന്നത്? **2**

**SECOND TERMINAL EXAMINATION
STANDARD - 2**

Total marks
obtained
out of 50

MATHEMATICS

Part - A

Time : 2 hrs.
Marks : 50

(Write the answers in the question paper itself)

1. Write the numerals for the following: 2

a. Four hundred and thirty two -

b. Six hundred and twenty seven -

2. Write in words: 2

a. 769 -

b. 307 -

3. Put the following numbers in ascending order: 4

667

766

453

3

320



4. Circle the number which is not included in the group: 2

a. 200

300

400

450

b. 15

6

12

18

5. Fill in the missing number: 4

67 69

362 364

100 102

511 513

6. Put '✓' for the correct statements and 'X' for wrong statements: 4

a. 2 ten rupee notes = 30 rupees.

b. 100 paise = 1 rupee

c. 4 fifty paise coins make a rupee.

d. 10 two rupee notes = 20 rupees.

7. Add the following and find the answer from the box: 3

a. $46 + 24 =$ b. $25 + 49 =$ c. $14 + 14 =$

28	70	74
----	----	----

8. Match the tables with the answers: 5

a. $8 \times 112 =$

819

b. $91 \times 9 =$

70

c. $7 \times 10 =$

90

d. $8 \times 13 =$

896

e. $6 \times 15 =$

104

9. Do the following: 8

a. 443

b. 670

c. 673

d. 582

$225 +$

=====

$205 +$

=====

$566 +$

=====

$431 +$

=====

10. Subtract the following: 4

a. Rs P
 7 45
 - 4 10

b. Rs P
 20 20
 - 6 15

11. The cost of three toys are given: 6



Rs. 65 p 40



Rs. 48 p 20



Rs. 52 p 25

- a. Rakesh bought a toy train and a toy truck. How much did he spend?
.....
- b. Meenu bought a toy car and a toy truck. How much did she spend?
.....
- b. Ali bought a toy car and a toy train. How much did he spend?
.....

Part - B

(Use separate answer sheets to write the answers)

- 12. In a farm there were 588 coconut trees. 123 trees fell down because of strong winds. How many trees were left? 2
- 13. Each student of a class was given 6 notebooks at the beginning of the year. There were 38 students in a class. How many notebooks were given away? 2
- 14. Mohit went for shopping for Onam. He spent Rs. 250 on clothes, Rs. 200 on shoes and Rs. 185 on sweets. How much money did he spend in all? 2

SECOND TERMINAL EXAMINATION STANDARD - 2

Total marks
obtained
out of 50

SCIENCE

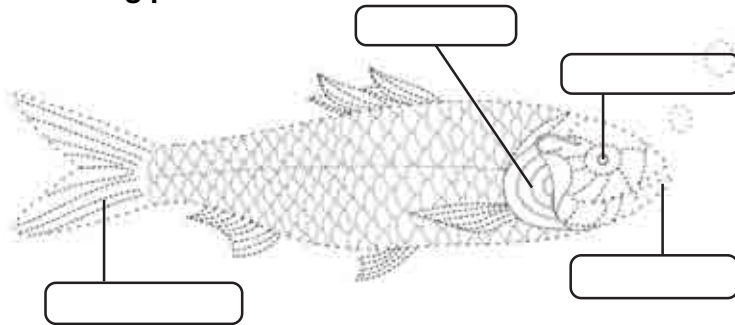
Part - A

Time : 2 hrs.
Marks : 50

(Write the answers in the question paper itself)

1. Label the following parts:

4



2. Fill in the blanks with the words given:

3

frog tongue scales

- a. We taste food with our
- b. Tadpole is the young one of
- c. The body of a fish is covered with

3. Tick the correct answer:

2

- a. Fish breathe through the lungs / gills.
- b. Birds have beak /teeth which help them to eat food.
- c. We get leather from buffaloes / hen.
- d. Flat, sharp teeth helps to tear / chew grass.

4. Draw on the dotted line and name the organ:

3

.....



5. Match the picture with its name :

4



Turtle

Crab



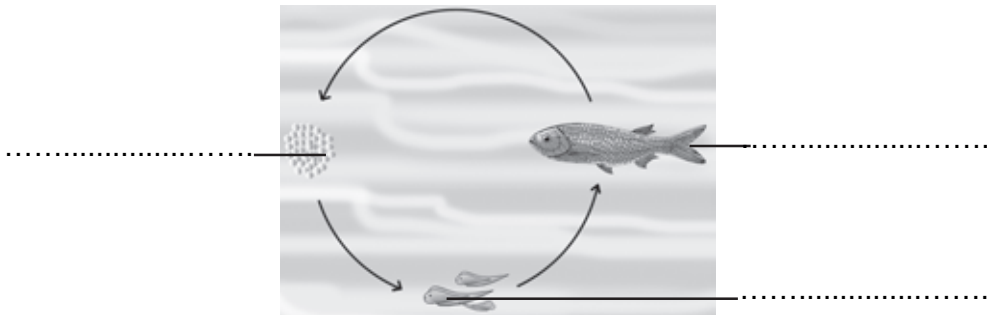
Dolphin

Octopus



6. Write the name of each picture:

3



7. Name in twos:

8

- a. Animals that eat only flesh.
- b. Animals that eat flesh of dead animals.
- c. Birds that give us eggs.
- d. Animals that can carry loads.

8. Put '✓' or 'X' next to the sentence:

4

- a. Domestic animals live in the forests.
- b. An ostrich can fly long distances.
- c. Fins help a fish to swim.
- d. The skin is a sense organ.

9. Tick the correct answer:

3



pleasant smell / unpleasant smell



bitter taste / sour taste



cold / hot

10. Find the bird/animal:

3



This animal gives us wool PHSEE

b. This bird eats flesh of dead animals TLVUERU



This animal gives us milk TAOG

11. Put in the correct columns:

4

ice cream	salt biscuits	sugar	salt
-----------	---------------	-------	------

SWEET	SALT

Part - B

(Use separate answer sheets to write the answers)

12. Answer the following:

- a. Name any three sense organs. 3
- b. Name two animals that are not fish but live in water 2
- c. Give the uses of: 4
 - 1. Nest
 - 2. Feathers

SECOND TERMINAL EXAMINATION STANDARD - 2

Total marks
obtained
out of 50

SOCIAL STUDIES

Part - A

Time : 2 hrs.
Marks : 50

(Write the answers in the question paper itself)

1. **Name the season :** **4**

- a. When new leaves come on plants
- b. When it snows

2. **Write the time given in each clock:** **4**

I wake up at



and go to school at



After school I return at



and go to play at.....



3. **Fill in the blanks:** **4**

- a. We should wear when it is hot.
- b. There arehours a day.
- c. Gandhiji's birthday is celebrated as
- d. Christmas is celebrated on

4. **Write the numbers:** **3**

- a. Number of days in a week.
- b. Number of days in a month.
- c. Number of hours on a clock.

5. Write GOOD or BAD: 3

- a. You can throw garbage in public places.
- b. You should take a bath everyday.
- c. You should do regular exercise.
- d. You should brush your teeth only in the morning.
- e. Your house should be cleaned and dusted from time to time.
- f. Do not allow water to collect around the house.

6. Draw on the dotted line and name it: 3



7. Write 'T' or 'F' :5

- a. Holi is called the festival of lights.
- b. We can see dark clouds on cloudy days.
- c. 15th January is celebrated every year as Republic Day.
- d. In the mornings and evenings , shadows appear very short.
- e. Annual Day in school is celebrated once a year.

8. In school, what happens on: 4

- a. Annual day
.....
- b. Sports day
.....

8. Match the following:

5



Annual Day

snow

rain

Diwali

Onam



10. Which is the hour hand and which is the minute hand?

2



Part - B

(Use separate answer sheets to write the answers)

11. Answer the questions:

10

- Why do we wear raincoats in the rainy season?
- Where do you see the sun at noon?
- What are two magic words you must use while talking to others?
- Why are some festivals called national festivals?
- How do you take care of the school property?

12. Draw a flower carpet and colour it:

3

ANNUAL EXAMINATION STANDARD - 2

Total marks
obtained
out of 50

ENGLISH

Part - A

Time : 2 hrs.
Marks : 50

(Write the answers in the question paper itself)

1. Write words beginning with 'co...': 4

- a. The opposite of hot
- b. A bed to sleep on
- c. A domestic animal
- d. The opposite of go

2. Match the following: 2



Don't park here



No U-turn

Do not overtake

Do not use horn here



3. Answer the questions with the words 'soon' or 'early': 2

- a. When did you get up ?
.....
- b. When will the bus be leaving ?
.....

4. Can you write the female for these words? 3

- a. man
- b. horse
- c. landlord

5. Help these cartoon characters find their names. Draw a line to their names: 4



Spider Man



Tom the cat



Donald Duck

Mickey Mouse




6. Look at the pictures and write a sentence. Start your sentences with 'Don't...:'

4



7. Fill in with the help of jumbled letters:

4

a.  The teeth of the BOMC



b. The trunk of the ETRE

8. Use 'tall', 'taller', 'tallest' in the blanks :

3



a. The camel is aanimal.

b. The giraffe is the animal.

c. The giraffe is than the elephant.

9. Choose the correct adjective:

4

noisy	beautiful	fat	little
-------	-----------	-----	--------

a. Theman eats lots of rice.

b. The girl is wearing a sari.

c. Thebaby is crying.

d. I don't likecrackers.

10. Write five sentences about the picture:

5



11. Name these tools:

4



.....



.....

12. Read the passage and answer the questions:

5

My father is a builder. He builds houses. He builds schools. He builds houses and schools. He uses a hammer and a saw.

My brother is an engineer. He designs buildings. He designs bridges. He designs buildings and bridges. He uses a pencil and a calculator.

My son is an athlete. He plays soccer. He plays tennis. He plays soccer and tennis. He uses a racket and a ball.

My daughter is an artist. She draws pictures of animals. She draws pictures of people. She draws pictures of animals and people. She uses a pencil and a piece of paper.

a) Who is a builder?

my father my daughter my son

b) What does my brother do?

He is a pilot He is an engineer He is an artist

c) Who uses a saw?

my father my brother my son

d) Who uses a racket?

my daughter my brother my son

e) Who do you think may use an eraser ?

builder artist athlete

Part - B

(Use separate answer sheets to write the answers)

13. Answer these questions:

2 x 3 =6

a. When did the children remove their masks?

b. Why did King Midas ask God to take back the boon ?

c. What did the capseller do when he became very angry ?

ANNUAL EXAMINATION STANDARD-2

Total marks
obtained
out of 50

Time : 2 hrs.
Marks : 50

മലയാളം

(ഉത്തരം ചോദ്യക്കടലാസിൽ തന്നെ എഴുതുക.)

1. **സമാനപദം എഴുതുക:** 4

ചില്ല	ശീലം	ലജ്ജിച്ചു	ഗാനം
-------	------	-----------	------

2. **ഒറ്റപ്പദം എഴുതുക:** 3
 അതിഥികളെ ക്ഷണിച്ചു വരുത്തി നൽകുന്ന ഭക്ഷണം -
 വലിയ മരം -

3. **ഒറ്റപ്പദമോ വികസിതരൂപമോ എഴുതുക:** 5
 തരു + ആയി =
 ചിറകിനടിയിൽ =
 വസ്ത്രം + ഇല്ലാത്ത =
 വനോത്സവം =
 സൂക്ഷിക്കണം + എന്ന് =

4. **അനുയോജ്യമായവ തമ്മിൽ യോജിപ്പിച്ച് ചേർക്കാം:** 5

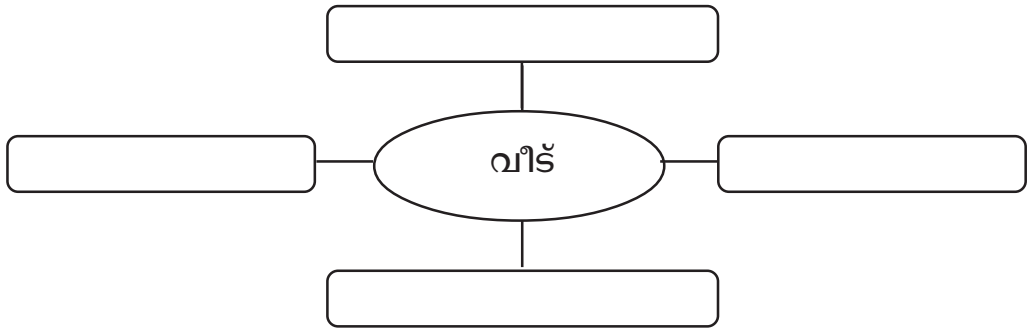
ചിറക്	തൊപ്പി
അഹങ്കാരം	വസ്ത്രം
തല	വിഭവസമൃദ്ധം
മുഷിഞ്ഞ	തൂവൽ
സദ്യ	ആപത്ത്

5. **ഒറ്റയാനെ വളയത്തിലാക്കുക:** 3

a. പൂവ്	കായ്	ഇല	വനം
b. സത്യം	ദയ	അഹങ്കാരം	ആദരവ്
c. അരി	പായസം	പപ്പടം	സാമ്പാർ

6. **താഴെ കൊടുത്തിരിക്കുന്ന പദങ്ങളിൽ നിന്ന് അനുയോജ്യമായ പദങ്ങൾ കണ്ടെത്തി ഖണ്ഡിക പൂർണ്ണമാക്കുക:** 5
 (പല്ല് വെട്ടണം വൃത്തിയായി വീടും വസ്ത്രം)
 ശരീരം സൂക്ഷിക്കണം. ദിവസവും തേക്ക
 ണം, കുളിക്കണം. വളരുന്ന നഖം വൃത്തിയുള്ള
 ധരിക്കണം. പരിസരവും വൃത്തിയായി സൂക്ഷിക്കണം.

7. പദസൂര്യൻ പൂർത്തിയാക്കി, പദസൂര്യനിലെ പദങ്ങളും കേന്ദ്രപദവും ചേർത്ത് വീടിനെക്കുറിച്ച് എഴുതുക: 4



8. ഒറ്റവാക്കിൽ ഉത്തരം എഴുതുക: 5

- a. കൂട്ടിയെ പാഠം പഠിക്കാൻ സഹായിക്കുന്നത് ആര്?
- b. ഏത് പുഴയുടെ തീരത്താണ് ആൽമരം നിന്നിരുന്നത്?
- c. ആരാണ് വിരുന്ന് നടത്തിയത്?
- d. അറിവിന്റെ വിത്തുകൾ വാരി വിതയ്ക്കുന്നതാര്?
- e. ആരുടെ നൃത്തമാണ് ആർക്കും ഇഷ്ടപ്പെടാതിരുന്നത്?

PART - B

(ഉത്തരങ്ങൾ വേറെ പേപ്പറിൽ എഴുതേണ്ടതാണ്.)

9. കവിത വായിച്ച് താഴെ കൊടുത്തിരിക്കുന്ന ചോദ്യങ്ങൾക്ക് ഉത്തരം എഴുതുക: 4

കണ്ടനും ചിണ്ടനും ചുണ്ടയുമായ്
 കിനാവു കണ്ടു നടന്നു നീങ്ങി
 ചിണ്ടാ ഇന്നൊരു വാളു കുരുങ്ങിയാൽ
 അത്താഴം ഉണ് കെങ്കേമം
 കണ്ടന്റെ കൊതിയുറും വാക്കുകൾ കേൾക്കവെ
 ചിണ്ടന്റെ ചുണ്ടിൽ പൂപ്പുഞ്ചിരി.

- a. ആരൊക്കെയാണ് ചുണ്ടയുമായി നടന്നത്?
- b. ചുണ്ടയിൽ വാളുകുരുങ്ങിയാൽ എന്തു സംഭവിക്കും?
- c. കണ്ടന്റെ കൊതിയുറും വാക്കുകൾ കേട്ടപ്പോൾ ചിണ്ടൻ എന്ത് ചെയ്തു?
- d. 'സ്വപ്ന'ത്തിന്റെ സമാനപദം കവിതയിൽ നിന്ന് കണ്ടെത്തി എഴുതുക.

10. ഉത്തരം എഴുതുക: 12

- a. മരം എന്തെല്ലാമാണ് നമുക്ക് തരുന്നത്?
- b. കൈകൾ വൃത്തിയാക്കിയിരിക്കുവാൻ നാം എന്താണ് ചെയ്യേണ്ടത്?
- c. കുരങ്ങനെ എല്ലാവരും പ്രശംസിക്കാൻ കാരണമെന്ത്?
- d. നിങ്ങളുടെ വിദ്യാലയത്തിന്റെ പേരും സ്ഥലവും എഴുതുക.
- e. അമീർ അത്ഭുതപ്പെടാൻ കാരണമെന്ത്?
- f. മാതാപിതാക്കളുടെ ഉപദേശം കേൾക്കാതിരുന്നാൽ എന്താണ് സംഭവിക്കുന്നത്?

ANNUAL EXAMINATION STANDARD - 2

Total marks
obtained
out of 50

MATHEMATICS

Part - A

(Write the answers in the question paper itself)

Time : 2 hrs.
Marks : 50

1. Match the objects with their shapes:

5



cuboid

cylinder

cube

cone

sphere



2. Fill in the blanks:

7

- a. One day has hours.
- b. has 28 days.
- c. The first day of the week is
- d. August comes just after
- e. The last month of a year is
- f. Thursday comes just after
- g. There are months in a year.

3. Measure with scale and write the length in cms.:

2



.....

4. Look at the clock and write the time:

4½







5. Draw the hands of the clock to show the time given:

4½



10.15



4.50



2.00

6. Tick the correct option:

3

a. Which is longer?





b. Which is heavier?





c. Which glass has less water?



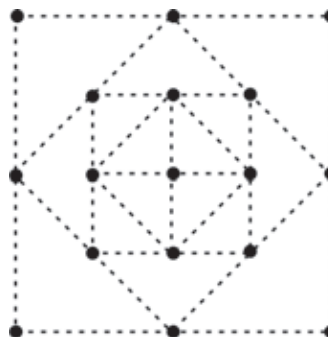


7. Draw lines using the points given below. Use red for vertical lines, green for horizontal lines and yellow for slant lines (from point to point is one line): 5

a. Number of vertical lines =

b. Number of horizontal lines =

c. Number of slant lines =



8. Put these things in the correct column:

9

(milk, pumpkin, cloth, cement, rice, juice, rope, diesel, height of a tree)

litres	kilograms	metres

9. Look at the pictures and fill in the blanks:

5



3l



2l



10l



5l

- We have litres of water.
- There are litres of petrol.
- The capacity of petrol can is more than the water can.
(2 litres, 5 litres)
- Orange juice is less than the oil. (1 litre, 2 litre)
- If petrol and oil are mixed it becomes litres. (15, 13)

10. Colour the shapes as directed:

5

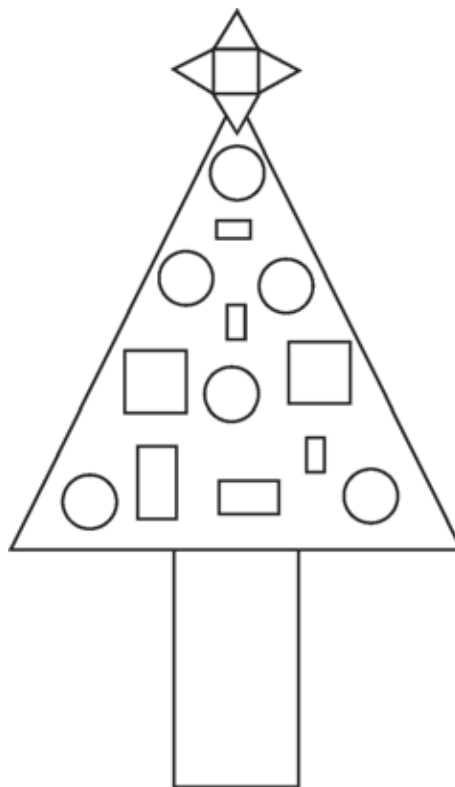
Colour

triangle – green

rectangle – red

circle – yellow

square – blue



ANNUAL EXAMINATION STANDARD - 2

Total marks
obtained
out of 50

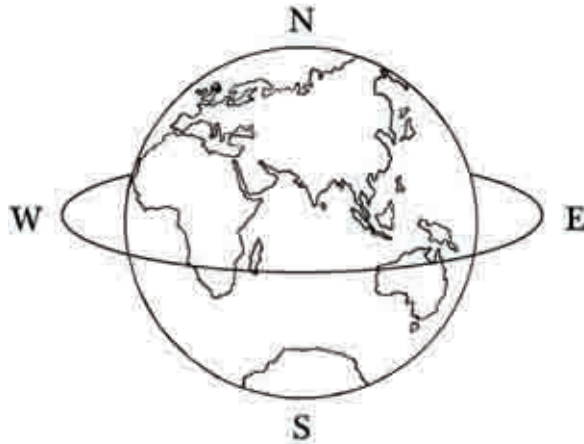
SCIENCE

Part - A

Time : 2 hrs.
Marks : 50

(Write the answers in the question paper itself)

1. Draw the arrow to show the direction in which the earth spins. Colour the picture: 3



2. Tick the correct option:

5

a. car	<input type="checkbox"/>	living thing	<input type="checkbox"/>	non-living thing	<input type="checkbox"/>
b. mountain	<input type="checkbox"/>	natural thing	<input type="checkbox"/>	man-made thing	<input type="checkbox"/>
c. source of water	<input type="checkbox"/>	wind	<input type="checkbox"/>	rain	<input type="checkbox"/>
d. pencil	<input type="checkbox"/>	solid	<input type="checkbox"/>	liquid	<input type="checkbox"/>
e. Carbondioxide	<input type="checkbox"/>	liquid	<input type="checkbox"/>	gas	<input type="checkbox"/>

3. Match the following:

5

smoke	kills germs
oxygen	no definite shape
wind	impure air
boiling water	for breathing
gas	moving air

4. Fill in the blanks:

6

- a. is the satellite of earth.
- b. The is a very bright star.
- c. Most parts of the earth are made up of
- d. The dirty water is not to drink.
- e. Air has water in the form of
- f. All things are made up of

5. What is inside? Write 'L' for liquid and 'G' for gas:

2



6. Put these into the correct group:

6

(egg,milk,cotton,furniture,leather,silver,gold,diamond,rubber,clay,fur,riceflour)

FROM PLANTS	FROM ANIMALS	FROM MINERALS

- 7. State true / false:** **6**
- a. The earth is bigger than the sun.
 - b. Solids have a definite shape.
 - c. Most of the rivers flow into the seas.
 - d. Air is not needed for burning.
 - e. Living things grow.
 - f. The sun is made up of hot burning gases.

- 8. Answer in one word:** **5**
- a. Shape of the moon.
 - b. Number of days that make one year.
 - c. The side of the earth facing sun has
 - d. Small streams join and form
 - e. Number of days that moon takes to go round the earth.

- 9. Name each:** **4**
- a. A gas that is given out by plants while making food.
 - b. These invisible creatures can make us ill.
 - c. The star closest to the earth.
 - d. Time taken by earth to spin round once.

Part - B

(Use separate answer sheets to write the answers)

- 10. Name, draw and colour one source of water:** **2**
- 11. Answer the following:**
- a. Why is there no life on moon? **2**
 - b. Give two uses of water. **2**
 - c. State two ways by which water can be purified.. **2**

**ANNUAL EXAMINATION
STANDARD - 2**

Total marks
obtained
out of 50

SOCIAL STUDIES

Part - A

(Write the answers in the question paper itself)

Time : 2 hrs.
Marks : 50

1. Look at the map given. Follow the instructions given:

6



- a. Give green colour to your state.
- b. Name your state.
- c. Give red colour to the state where Kannada is spoken.
- d. Give brown colour to the northern most state.
- e. Name the ocean to the south of India.
- f. Give blue colour to the oceans and seas.

2. Name the following:

10

- a. Two rivers in your country.
- b. Language spoken in your state.
- c. Fastest means of transport.
- d. One who flies a plane.
- e. Flights that take people within a country.
- f. Model of the earth.
- g. Big lands.
- h. Blue colour on the globe.
- i. Land surrounded by water on three sides.

3. Can you recognise them? Tick 2 correct options in the box:

4



- Dr. Manmohan Singh
- Dr. Abdul Kalam
- Prime Minister of India
- Chief Minister of Kerala

- President of India
- Prime Minister of India
- Pranab Mukherjee
- Rahul Gandhi

4. Match A to B:

6

- a.
- b.
- c.
- d.
- e.
- f.

5. Answer in a sentence:

16

a. How many states are there in India?

.....

b. Who is the head of our country?

.....

c. What is the language spoken in Kerala?

.....

d. What is our planet called?

.....

e. What is the shape of our planet?

.....

f. Where do rivers starts from?

.....

g. How many main directions are there?

.....

h. How many wheels does an autorickshaw have?

.....

Part - B

(Use separate answer sheets to write the answers)

6. Answer the questions:

8

a. What is the difference between a hill and a plain?

b. What is the difference between cargo ships and passenger ships?