

Question Bank

collection of model question papers

STANDARD-4



Publishers Pvt. Ltd.

IX/14-15, Kakkanad-Pallikkara Road, Athani, Kusumagiri.P.O., Kakkanad, Kochi-682 030

Phone : 0484-2429261, 3291869, 8594040422

E-mail: rainbowpublishers@ymail.com

Website: rainbowpublishersindia.com

FIRST TERMINAL EXAMINATION STANDARD - 4

Total marks
obtained
out of 50

ENGLISH

Part - A

Time : 2 hrs.
Marks : 50

(Write the answers in the question paper itself)

- 1. Circle the correct answer:** **2**
- a. toil - work hard work well work always
b. withered - folded dried shaded
c. reluctantly - happily unwillingly unkindly
d. filthy - easily happy dirty
- 2. Use -er to complete the sentence:** **3**
- a. Rakesh is (good / batsman)
b. My sister is (old / brother)
c. The bat is (big / ball)
- 3. Write the opposite of:** **2**
- shine x soft x
accept x living x
- 4. Complete the following using the expression 'as.....as':** **3**
- a. I don't like him. He is (cunning / fox)
b. The princess was (beautiful / rose)
c. The little girls were (bright / sunshine)
- 5. Where would these people go to worship?** **3**
- a. A Sikh would go to a
b. A Muslim would go to a
c. A Jew would go to a
- 6. Use the given words to fill in blanks:** **3**
- was playing were playing was studying were studying
- a. She at the University.
b. My sister and I near the river.
c. Ravi for the school team.

7. Write two rhyming words for each: 2

bound -

toss -

8. What do they do? 3

a. A cobbler -

b. A mason -

c. A lyricist -

9. Complete the sentences meaningfully: 3

a. If you want some money

b. If you come now

c. If I don't pass the exam

10. Choose an adjective, add **-est** and fill in blanks: 3

bad	fat	wide
-----	-----	------

a. The Pacific Ocean is the in the world.

b. Prem was the of all the boys in the class.

c. This was the match of the season.

11. Read the following passage on penguins and answer the questions: 6

Penguins are one of the world's most interesting birds. They are a group of flightless birds living almost exclusively in the southern hemisphere. Some types of penguins are also found in Galapagos Islands.

They waddle when they walk, and have flippers instead of wings. The bones in a penguin's flippers are heavier and more solid than those in the wings of a flying bird. This helps the penguin "fly" through the water. The penguin's black back and white front has an important function, too - camouflage in the water. Penguins blend in with the sea from above and with the sky from below. This makes it harder for predatory birds, leopard seals, sea lions and sharks to see them.

Let's talk about the Emperor penguin of Antarctica. The Emperor penguin is the world's largest penguin. Its oily outer feathers help keep it dry. Its dense inner down feathers and thick fat layer helps keep it warm. Emperor penguins also often huddle in groups to conserve heat. A mother Emperor penguin lays only one egg at a time. After the mother Emperor penguin lays the egg she travels to the open sea to feed on fish, squid etc. The father stays behind with the egg. He keeps it warm and protected by balancing it on his feet and covering it with feathered skin.

- a. Most wild penguins live...
 in South Africa near the North Pole
 in the Southern Hemisphere near the Equator
- b. The father Emperor penguin keeps the egg warm and hatches the chick. Where is the mother penguin during this time?

- c. How are a penguin's flipper bones different from the bones in other birds' wings?

- d. A sea lion might have a hard time seeing a penguin swimming in the water. Why?
 A penguin becomes invisible when it swims in cold water.
 It swims very fast and looks like a streak zooming through the water.
 Because the penguin blends in with the sea and the sky.
- e. With the help of clues given, find the words from the passage:
 (i). g l (hint: unable to fly)
 (ii) c r v e (hint: preserve or maintain)

PART - B

(Use separate answer sheets to write the answers)

- 12. Complete the following: 4**
- a. Persephone could stay with her mother only half the year because.....
- b. Nursing was not a respectable profession because.....
- c. Antonio was unable to pay Shylock because.....
- d. The Greeks prayed to Demeter because.....
- 13. Answer the following questions: 8**
- a. Why did Hades agree to send Persephone back?
- b. Why does the boy prefer cycling down a hill to skating?
- c. How did Shylock get a chance to take revenge on Antonio?
- d. What was the condition at Scutari before Florence came to work there?
- 14. Describe in your own words a wonderful experience with your bicycle: 5**

FIRST TERMINAL EXAMINATION STANDARD-4

Total marks
obtained
out of 50

Time : 2 hrs.
Marks : 50

മലയാളം

(ഉത്തരം ചോദ്യക്കടലാസിൽ തന്നെ എഴുതുക.)

- 1. സമാനപദം എഴുതുക: 4½**

ശബ്ദം = തുടർ =

മരതകം = സംഭവരഹിതം =

മോചനം = നിലംപൊത്തുക =
- 2. ഒറ്റയാൻ ആര്? 2½**

a. യുദ്ധം	ആസ്കന്ദനം	ചക്രാംഗം	സമരം
b. ആഖ്യോഭ്യക്തൻ	വൃഷഭംശകം	പുച്ഛ	ഉന്മൂലം
- 3. ഒറ്റവാക്കിൽ ഉത്തരം എഴുതുക: 10**

 - a. ഗാന്ധിയുടെ കുട്ടിക്കാലം എവിടെയായിരുന്നു? -
 - b. ജപ്പാനിലെ ഹിരോഷിമയിൽ അണുബോംബിട്ട രാജ്യക്കാർ ഏത്? -
 - c. കരളും മിഴിയും കവർന്നതെന്ത്? -
 - d. നമ്മുടെ രാഷ്ട്രപിതാവ് ആര്? -
 - e. എന്തിനെയാണ് കടൽതീരം കടലിൽനിന്ന് സംരക്ഷിക്കുന്നത്? -
 - f. 'പുച്ഛയ്ക്കാർ മണിക്കെട്ടും' എന്ന് ചോദിച്ചതാര്? -
 - g. നമ്മുടെ മാതൃഭാഷ ഏത്? -
 - h. ആഗസ്റ്റ് 6 ന് ജപ്പാനിലെ കുട്ടികൾ കൂട്ടുകാർക്ക് അയച്ചുകൊടുക്കുന്ന സ്നേഹസമ്മാനം എന്ത്? -
 - i. കടൽവെള്ളത്തിന്റെ രുചി എന്ത്? -
 - j. പുലർക്കാലം എവിടെനിന്നാണ് എത്തിനോക്കിയത്? -
- 4. എതിർലിംഗം എഴുതുക: 4**

അധ്യാപകൻ - അവൻ -

മാതാവ് - സഹപാഠി -

5. ഒറ്റപ്പദം എഴുതുക: 3
 കാണാൻ അഴകുള്ളത് -
 സുഖമില്ലാത്ത അവസ്ഥ -

6. എതിർപദം എഴുതുക: 4
 ആരോഗ്യം X നിർഭാഗ്യം X
 സന്തോഷം X നിരപരാധികൾ X

PART - B

(ഉത്തരങ്ങൾ വേറെ പേപ്പറിൽ എഴുതേണ്ടതാണ്)

7. കഥ വായിച്ച് താഴെ കൊടുത്തിരിക്കുന്ന ചോദ്യങ്ങൾക്ക് ഉത്തരം എഴുതുക: 3
 ഒരു വണ്ടിക്കാരൻ വലിയ ഭാരം കയറ്റിയ വണ്ടി, ഒരു ചതുപ്പുനിലത്തിലൂടെ ഓടിക്കുകയായിരുന്നു. പെട്ടെന്ന് വണ്ടിചക്രം ചളിയിൽ പുണ്ടുപോയി. അയാൾ ശക്തിമാനായ ഹെർക്കുലീസ് ദേവനോട് പ്രാർത്ഥിച്ചു. ഹെർക്കുലീസ് അയാൾക്കുമുമ്പിൽ പ്രത്യക്ഷനായി ഇങ്ങനെ പറഞ്ഞു: “മറ്റുള്ളവരോട് സഹായത്തിനഭ്യർത്ഥിക്കുന്നതിന് മുമ്പ് തന്റെ ശക്തിയും കഴിവും പൂർണ്ണമായി വിനിയോഗിച്ച് നോക്കണം. നിന്റെ ചുമൽ വണ്ടിചക്രത്തോടടുപ്പിച്ച് അതുയർത്തി നോക്കൂ!” വണ്ടിക്കാരൻ അപ്രകാരം ചെയ്തപ്പോൾ വണ്ടി മുന്നോട്ടു നീങ്ങി.
- a. ഈ കഥയ്ക്ക് ഒരു പേര് കൊടുക്കുക. 1
 b. വണ്ടിക്കാരൻ ആരോടാണ് പ്രാർത്ഥിച്ചത്? 1
 c. വണ്ടിയ്ക്ക് എന്ത് സംഭവിച്ചു? 1
 d. ദേവൻ വണ്ടിക്കാരന് എന്ത് ഉപദേശമാണ് നൽകിയത്? 1½
 e. ഈ കഥയിൽനിന്നും കിട്ടിയ ഗുണപാഠം എന്ത്? 1½
8. കവിത വായിച്ച് രണ്ട് ചോദ്യങ്ങളും അവയുടെ ഉത്തരവും എഴുതുക: 4
 അങ്ങ് കിഴക്കിൻ മെത്തയിൽനിന്നും
 ഉണർന്നെന്നണീറ്റു പൊൻസൂര്യൻ
 എന്നുടെ തളിരാം വദനം കാൺകെ
 പുഞ്ചിരിതുകി പൊൻകതിരോൻ
 കുന്നിൻ മുകളിൽ നിന്നൊരു കിളിതൻ
 മധുരതേൻമൊഴി കേൾക്കുന്നു.
9. യുദ്ധത്തെപ്പറ്റി ഒരു ലഘുലേഖനം എഴുതുക. 3½
10. ‘അഹങ്കാരം ആപത്താണ്’ എന്നതിനെ ആസ്പദമാക്കി ഒരു കഥ എഴുതുക. 4
11. ഗ്രാമഭംഗിയെ വർണിച്ചുകൊണ്ട് ഒരു കവിത എഴുതുക. (6 വരിയിൽ കുറയരുത്) 4½

**FIRST TERMINAL EXAMINATION
STANDARD - 4**

Total marks
obtained
out of 50

MATHS

Part - A

Time : 2 hrs.
Marks : 50

(Write the answers in the question paper itself)

1. Do as directed:

10

a. Expand the following number.

88436 -

b. Counting in hundreds write the next two numbers.

44562,,

c. Write in words.

685004 -

d. Subtract the smallest number from the greatest number.

7658, 4536, 7689, 65887 -

e. Write in descending order.

7658, 6587, 7998, 5768
.....

f. Write the greatest four digit number with given digits.

3, 9, 6, 0 -

g. Round off the following numbers to the nearest thousand.

785 - 5695 -

h. Write the place value of the underlined digit.

99356 -

i. Write the number for the given expanded form.

50000 + 4000 + 200 + 20 + 5 =

j. $6784 \times 0 =$

2. Add the following:

3

$$\begin{array}{r} \text{a. } 4563 + \\ 7331 \\ \hline \\ \hline \end{array}$$

$$\begin{array}{r} \text{b. } 3009 + \\ 5454 \\ \hline \\ \hline \end{array}$$

$$\begin{array}{r} \text{c. } 5621 + \\ 2438 \\ \hline \\ \hline \end{array}$$

3. Subtract:

3

$$\begin{array}{r} \text{a. } 8769 - \\ 6543 \\ \hline \\ \hline \end{array}$$

$$\begin{array}{r} \text{b. } 6758 - \\ 4809 \\ \hline \\ \hline \end{array}$$

$$\begin{array}{r} \text{c. } 9654 - \\ 3429 \\ \hline \\ \hline \end{array}$$

4. Multiply the following:

3

$$\begin{array}{r} \text{a. } 48 \times \\ 5 \\ \hline \\ \hline \end{array}$$

$$\begin{array}{r} \text{b. } 452 \times \\ 7 \\ \hline \\ \hline \end{array}$$

$$\begin{array}{r} \text{c. } 689 \times \\ 34 \\ \hline \\ \hline \end{array}$$

5. Multiply using expanded notation method:

6

a. 7301×4

.....
.....
.....

b. 673×7

.....
.....
.....

6. Estimate each sum to the nearest thousand: 2
- a. $6271 + 1012 = \dots\dots\dots$
- b. $5120 + 3121 = \dots\dots\dots$
7. Estimate each difference to the nearest hundred: 2
- a. $782 - 112 = \dots\dots\dots$
- b. $954 - 342 = \dots\dots\dots$

PART - B

(Use separate answer sheets to write the answers)

8. Simplify: 4
- a. $6554 - 4521 - 212 - 654$ b. $54387 + 4569 + 674 - 279$
9. The sum of three numbers is 85758. If the two numbers are 50235 and 25481. Find the third number: 3
10. By how much is 67788 greater than 44221? 2
11. Add the following numbers: 2
- a. 43897, 45852, 5437, 34 b. 45689, 45112, 564
12. Motu and his friends scored 350 runs in the first innings. His friend Sonu scored 45, Atul 33, Rakesh 45, Anil 95, Mukesh 66. How many runs did Motu score? 3
13. Round off 77123 and 4537 to the nearest hundred. Then find the difference: 2
14. A coconut farm had 78023 trees. 6481 trees were destroyed in the heavy rains. How many trees were left? 2
15. If the sum of 568 and 412 is subtracted from the sum of 879 and 101, what number is got? 3

**FIRST TERMINAL EXAMINATION
STANDARD - 4**

Total marks
obtained
out of 50

SCIENCE

Part - A

Time : 2 hrs.
Marks : 50

(Write the answers in the question paper itself)

1. Fill in the blanks: 5

- a. The earthworm breathes through its
- b. Polar bears have a thick layer of under their skin.
- c. The gas used by leaves to prepare food is called
- d. Carrots store in their roots.
- e. Animals that live on land are called

2. Match the following: 5

habitat

monkeys

trachea

fins

fish

parasite

mosquito

breathing tube

arboreal

natural environment

3. Tick the correct option: 3

- a. In water plants stomata is present on the (upper / lower) surface of the leaf.
- b. Human beings are (carnivores / omnivores).
- c. Fish breathes through (lungs / gills).

4. Name the following: 3

- a. Tiny pores on the leaves of plants.
- b. A parasite that lives in the human body.
- c. Plants that are completely immersed in water.

5. Define: **3**

a. Herbivores:

.....

b. Adaptation:

.....

c. Parasites:

.....

6. Give one adaptive feature of: **3**

a. Leech:

.....

b. Fixed plants:

.....

c. Eagles:

.....

7. Give a reason why: **5**

a. Desert plants have spine like leaves.

.....

.....

b. Some animals sleep during winter months.

.....

.....

c. Leaves are green.

.....

.....

d. Chameleons change colour.

.....
.....

e. Snakes have scales.

.....
.....

8. State whether true or false. If false, write the correct statement: 4

a. Whale breathes through its gills.

.....

b. Monkeys use their tails to balance themselves on trees.

.....

c. Exchange of gases take place in flowers.

.....

d. Hookworm lives inside the bodies of animals.

.....

PART - B

(Use separate answer sheets to write the answers)

9. Draw a leaf and label its parts. 5

10. Show with an experiment that sunlight is needed for the leaves to prepare food. 4

11. Answer the following: 10

a. Why do some animals have fur on their bodies?

b. How does camouflage help animals?

c. Give one example for each:

(i) Amphibians (ii) non-green plant

d. How does a plant use food?

e. Where are the following found?

(i) Hydrilla (ii) Pine (iii) Frogs (iv) Opossums

5

**FIRST TERMINAL EXAMINATION
STANDARD - 4**

Total marks
obtained
out of 50

SOCIAL STUDIES

Part - A

Time : 2 hrs.
Marks : 50

(Write the answers in the question paper itself)

1. Match the following:

5

Narmada river	Western Ghats
Ludhiana	Rajasthan
Hugli	Satluj basin
Anamalai hills	Central Highlands
Aravali hills	Kolkata

2. Fill in the blanks:

5

- a. The dam has been built on the river Satluj.
- b. The Himalayan mountains range from Jammu and Kashmir to
- c. The Southern Plateau is divided intoand
- d. The river originates in Tibet.
- e. The National Anthem was written by

3. Name the following:

5

- a. The highest waterfalls in India.
- b. A crop grown in plenty in Brahmaputra basin.
- c. The place where Yamuna joins Ganga.
- d. First Nepali to climb Mount Everest.
- e. The famous delta of the Ganga basin.

4. Where are they located? 5

- a. Iron and Steel industries -
- b. Indira Gandhi Canal -
- c. Himadri -
- d. Ashoka Pillar -
- e. Shiwalik range -

5. State whether true or false: 2½

- a. The Northern Plains are very fertile.
- b. Dense population along rivers causes pollution.
- c. The rivers in the Deccan Plateau flow from glaciers.
- d. Varanasi lies along the river Godavari.
- e. It is always very hot in the deserts.

6. Cut out the odd one and say why: 4½

- a. Narmada Krishna Godavari Kaveri
- b. Ghagra Gandak Kosi Ganga
- c. elephant camel leopard sambar

.....

.....

.....

.....

.....

.....

.....

.....

7. On the map of India, mark:

4

Nepal

Northern Plains

Deccan Plateau

Thar Desert



PART - B

(Use separate answer sheets to write the answers)

8. Draw the national flag and write the colours:

4

9. Answer the following:

10

- a. How is Rajasthan divided? Which part of Rajasthan is desert?
- b. What is peculiar about the hills and slopes of the lesser Himalayas?
- c. What are the two plateaus that comprise the Central Highlands?
- d. How does a desert area increase?
- e. What are the main industries in the Deccan region?

10. What are they?

5

Nomads

Hydroelectricity

Oasis

River basin

K2

SECOND TERMINAL EXAMINATION STANDARD - 4

Total marks
obtained
out of 50

ENGLISH

Part - A

Time : 2 hrs.
Marks : 50

(Write the answers in the question paper itself)

1. Use the suffix ‘-less’ and fill in the blanks: 2

- a. The.....children slept on the streets. (home)
- b. We sold the cycles as they were..... .(use)
- c. Thebody was taken out of the swimming pool.(life)
- d. He was scolded for being(care).

2. Write the noun form of the words: 4

ADJECTIVE	NOUN
a. angry	
b. shabby	
c. true	
d. neat	

3. Who are they? 3

- a. A person who can guide a ship.
- b. A person who is a member of a ship’s crew.
- c. A person who is a member of an army.

4. Use ‘one’ ‘another’ or ‘the other / others’. Use only once: 3

- a. Ram and Shyam are twins. is a doctor and
is a lawyer.
- b. I cannot give you this story book. I will give you

5. Change the following into reported speech: 3

- a. The shop keeper, “ What do you want? ”
.....
- b. Teacher to students, “ Have you brought your books?”
.....
- c. My friend asked me, “When is school reopening?”
.....

6. Rewrite sentences using ‘not only.....but also’: **3**

- a. Scrooge raised Cratchit’s salary and visited the family often.
- b. I have a dog and two cats as pets.
- c. He is good at cricket and football.

7. Join the following sentences with “who”: **3**

- a. Rahul is my brother. He is very tall.
- b. I gave the book to Seema. She has a test tomorrow.
- c. The little children got the prize. They sang very well.


8. Read the story and write the answer in a few words: **5**

One day, Tiggy Tiger caught a baby fox. He carried him off to his cave in his mouth.

On the way, Tiggy met Father Fox. He was surprised to see that the fox was laughing aloud. “Hee! Hee!

“How strange that the father fox should laugh when his baby has been caught!” Tiggy thought.

Soon Tiggy noticed that Mother Fox was also laughing, and the fox’s little brothers were laughing with her, too!



They all stood around Tiggy and laughed. “Ha! Ha! Hee! Hee!” When he heard them, Tiggy too burst out laughing.

The moment Tiggy opened his mouth, the baby fox jumped out. Then all the baby foxes ran off to the safety of their hole.

“Why did you all laugh so?” Tiggy called out. “To make you laugh! Then I could save my baby,” said Father Fox, laughing.

Tiggy saw the joke. All he could do now was join in the laughter too!

- a. What did Tiggy Tiger catch?
- b. What did Father Fox do?
- c. What did Mother Fox do?
- d. What happened when Tiggy opened his mouth?
- e. Find the opposite of: crying, sat

- 9. Use the given words to fill in the blanks:** **3**
- collapsed peacefully disobeyed
- a. The earthquake caused many buildings to be
- b. The naughty boyhis parents and was punished.
- c. They marched from the ground to the town hall.

- 10. Match the word with its meaning:** **2**
- | | |
|------------|------------------|
| a. shabby | avoid |
| b. stench | get |
| c. procure | horrible smell |
| d. shirk | in bad condition |

- 11. Who said these to whom?** **2**
- a. "I am prepared to bear your company. Will you not speak to me?"
- b. "I've come to take you home, dear brother".

- 12. Fill in the blanks with the correct form of the verb in the brackets:** **2**
- a. Mary ran to pick up the mango (fall)
- b. Mohan found his watch (lose)

Part - B

(Use separate answer sheets to write the answers)

- 13. Answer the questions:** **10**
- a. How did Vasco da Gama put down the mutiny?
- b. What do you think, the ghost wanted to tell Scrooge by showing him the vision of the dead man?
- c. Why did the poet pity the tramp?
- d. Why was Vasco Da Gama asked to find a sea-route to India?
- e. What caused Scrooge to feel ashamed of himself when the ghost showed him Christmas at Bob Cratchit's house?

- 14. Write a paragraph on a trip by boat:** **5**
- Where did you go? With whom? How long was it? What did you see?
Did you stop anywhere? Any other interesting facts?

SECOND TERMINAL EXAMINATION STANDARD-4

Total marks
obtained
out of 50

Time : 2 hrs.
Marks : 50

മലയാളം

(ഉത്തരം ചോദ്യക്കടലാസിൽ തന്നെ എഴുതുക.)

- 1. സമാനപദം എഴുതുക: 3**

അഭാവം = സ്വാർത്ഥത =

പരിണാമം = വിപണി =
- 2. ഒറ്റയാൻ ഏത്: 2**

a. ശത്രു രിപു അരി മനു

b. ഭൂമി ധരണി തന്ത്രി ധരിത്രി
- 3. എതിർപദം എഴുതുക: 3**

അന്തർഭാഗം X വേഗം X

പാമരൻ X മിതം X
- 4. ഒറ്റപ്പദം എഴുതുക: 2**

a. കൂത്തിനുപയോഗിക്കുന്ന ഒരു വാദ്യം =

b. പ്രവൃത്തി ചെയ്യുന്നയാൾ =
- 5. അർത്ഥം എഴുതി വാക്യത്തിൽ പ്രയോഗിക്കുക: 4**

a. അണിഞ്ഞു =

.....

b. അണഞ്ഞു =

.....
- 6. ഒറ്റവാക്കിൽ ഉത്തരം എഴുതുക: 10**

a. തുള്ളൽ കൃതിയുടെ കർത്താവാര്യ്?

b. ഇന്ത്യയിലെ ഏറ്റവും പുരാതനമായ സംഗീതോപകരണം?

c. വീട്ടുവളപ്പിൽ തയ്യാറാക്കുന്ന തോട്ടം?

d. സംഗീതം ഉയരുന്നതെവിടെ?

e. ജീവൻ നിലനിൽക്കുന്ന ഒരു ഗ്രഹം?

- f. ചുടലക്കളത്തിൽ കിടന്നുറങ്ങിയതാര്?
- g. ഒരു സമ്പൂർണ്ണാഹാരം?
- h. മലക്കറികൃഷിക്ക് യോജിച്ച മണ്ണ്?
- i. പ്രസിദ്ധനായ ഒരു വൈദികൻ?
- j. 'വിഷുക്കണി' എന്ന കവിത എഴുതിയതാര്?

PART - B

(ഉത്തരങ്ങൾ വേറെ പേപ്പറിൽ എഴുതേണ്ടതാണ്)

- 7. കവിത വായിച്ച് താഴെ കൊടുത്തിരിക്കുന്ന ചോദ്യങ്ങൾക്ക് ഉത്തരം എഴുതുക:**
- പൂവുകൾ തോറും പാറി നടക്കും
 പൂഞ്ചിറകുള്ളൊരു പൂമ്പാറ്റേ!
 ഒന്നു തൊടാൻ കൈ നീട്ടുമ്പോൾ
 പങ്ങിപ്പങ്ങിപ്പോവുകയോ?
 ഇലയുടെയടിയിൽ മുട്ടയിടാനായ്!
 അകലുകയാണോ പൂമ്പാറ്റേ!
- a. പൂമ്പാറ്റ മുട്ടയിടുന്നത് എവിടെ? **1**
 - b. എന്തിനാണ് പൂമ്പാറ്റകൾ പൂവുകൾ തോറും പാറി നടക്കുന്നത്? **1**
 - c. ഈ കവിതയ്ക്ക് ഒരു പേര് കൊടുക്കാമോ? **1½**
 - d. കവിതയുടെ ആശയം ചിത്രീകരിച്ച് പൂമ്പാറ്റയെക്കുറിച്ച് ഒരു ഖണ്ഡിക എഴുതുക? **1½+2½**
- 8. ഉത്തരം എഴുതുക:** **6**
- a. വീണയെ ഒരു സമ്പൂർണ്ണവാദ്യമെന്ന് വിളിക്കാൻ കാരണമെന്ത്?
 - b. ഓസോൺ പാളി ഭൂമിയെ രക്ഷിക്കുന്നതെങ്ങിനെ?
 - c. കുഞ്ചൻനമ്പ്യാരുടെ കൃതികളുടെ പ്രത്യേകത എന്ത്?
- 9. 'വിഷുക്കണി'യെക്കുറിച്ച് 6 വരികൾ കുറയാതെ ഒരു കവിത എഴുതുക.** **4½**
- 10. ആരും കൃഷി ചെയ്യാത്ത ഒരു കാലം വന്നാൽ എന്തായിരിക്കും ഭൂമിയിൽ സംഭവിക്കുക? (½ പേജിൽ കവിയാതെ എഴുതുക)** **4**
- 11. നിങ്ങൾക്കിഷ്ടപ്പെട്ട ഒരു ടെലിവിഷൻ പരിപാടിയെക്കുറിച്ച് വിവരണം തയ്യാറാക്കുക:** **4**

SECOND TERMINAL EXAMINATION STANDARD - 4

Total marks
obtained
out of 50

MATHEMATICS

Part - A

Time : 2 hrs.
Marks : 50

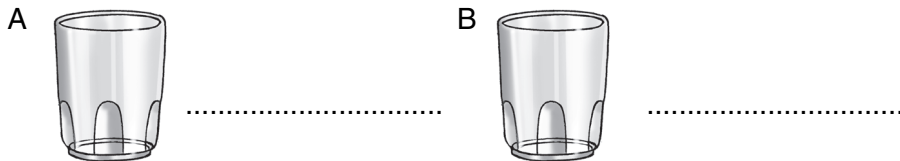
(Write the answers in the question paper itself)

1. Do the following: 3

- a. Imagine and write the weight in kilograms. Bag 'B' is the heaviest and Bag 'A' is the lightest.



- b. Colour the level of water in each glass and write the measure in ml. Glass 'A' has more water than glass 'B'.



2. Choose and write the multiples and factors of the following products: 3

- a. $5 \times 1 = 5$ Multiple Factors
- b. $6 \times 8 = 48$ Multiple Factors

3. Are these numbers odd or even? Write two more of the same kind: 2

48 24 36 50

.....

4. Are these numbers odd or even? Write two more of the same kind: 2

41 23 37 59

.....

5. Write 'T' or 'F': 2

- a. 12 is a factor of 60
- b. 1 cm = 100m
- c. 1 km = 1000m
- d. The distance around a circle is called perimeter

6. Fill in the blanks:

5

- a. If one is added to every odd number we get annumber.
- b. LCM is Lowest
- c. 1000ml is equal to
- d. The distance around a figure or shape is called
- e. 100 paise is equal to Rs.

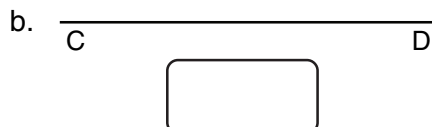
7. Convert the following:

4

- a. 2g 550 mg to mg -
- b. 6000 ml to litre -
- c. 20 l 150 ml to ml -
- d. 34000 m to km -

8. Measure the line segments and write the answer:

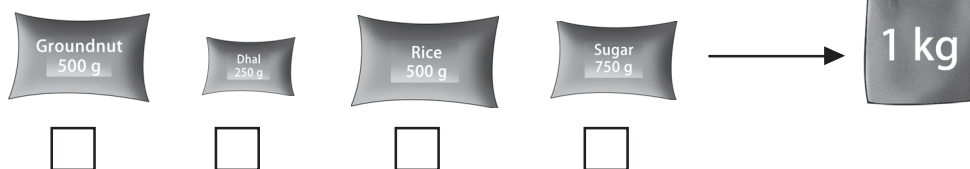
2



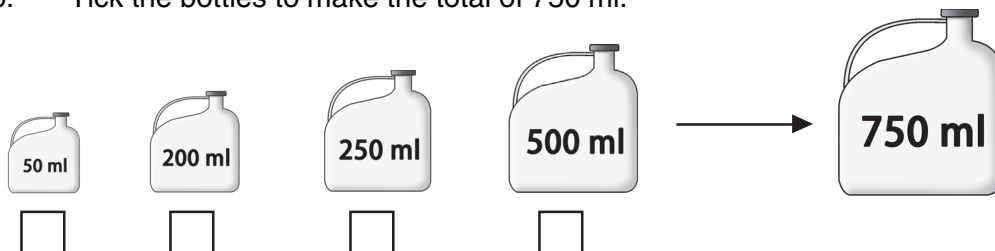
9. Do as directed:

3

a. Tick the packets you will use to make the total 1kg.



b. Tick the bottles to make the total of 750 ml.

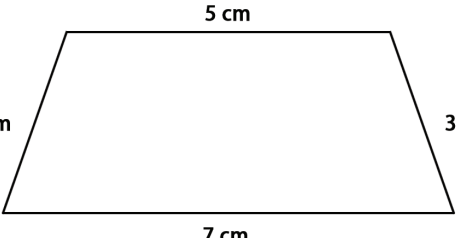
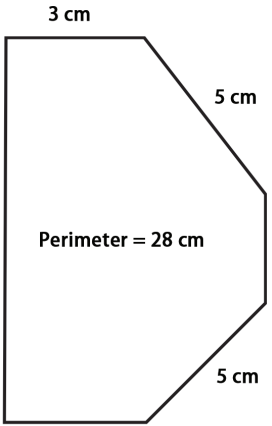


10. Write the even numbers between 112 and 122:

2

.....

11. Look at the figures and fill in the blanks:

<p>a. Find the perimeter.</p> <div style="text-align: center;">  </div> <p style="text-align: center;">Perimeter =</p>	<p>b. Find the missing length.</p> <div style="text-align: center;">  </div> <p style="text-align: center;">Perimeter = 28 cm</p> <p style="text-align: center;">Side =</p>
---	---

Part - B

(Use separate answer sheets to write the answers)

- | | |
|--|---------------------------|
| 12. Add the following and express in litres (l): | 3 |
| a. 350 ml, 450 ml, 200 ml | b. 650 ml, 775 ml, 575 ml |
| 13. Add the following and express in kgs: | 3 |
| a. 300g, 500g, 200g | b. 250g, 350g, 400g |
| 14. Find the prime factors of the following numbers: | 3 |
| a. 78 | b. 55 |
| 15. Find the L.C.M of: | 2 |
| 12, 24, 32 | |
| 16. Find the H.C.F of the following numbers : | 2 |
| 18, 30, 42 | |
| 17. Gokul went to the book shop to buy some books. The English books cost Rs. 98, Science books Rs. 105, Social Studies books Rs. 87, Maths books Rs. 75, and Hindi books Rs. 47. His mother gave him Rs. 500. How much money did he have left? | 2 |
| 18. The school library got 396 new books. The books were distributed equally among 18 classes. How many books did each class get? | 2 |
| 19. Rani got Rs. 225 as pocket money every month. How much money did she get in one year? | 2 |

SECOND TERMINAL EXAMINATION STANDARD - 4

Total marks
obtained
out of 50

SCIENCE

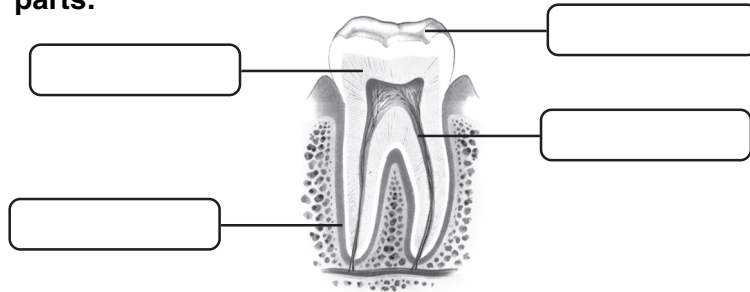
Part - A

Time : 2 hrs.
Marks : 50

(Write the answers in the question paper itself)

1. Mark the parts:

4



2. Tick the correct option:

3

- a. The teeth at the back of the mouth is canine/molars.
- b. The baby cockroach is called fry/nymph.
- c. The ribs protect the stomach/heart.
- d. Smoke and ash are examples of physical/chemical change.

3. Name the following:

5

- a. Change of water into ice. -
- b. The amount of space taken up by matter. -
- c. A food item that helps us to keep warm. -
- d. The protective layer covering the egg. -
- e. The top portion of the tooth. -

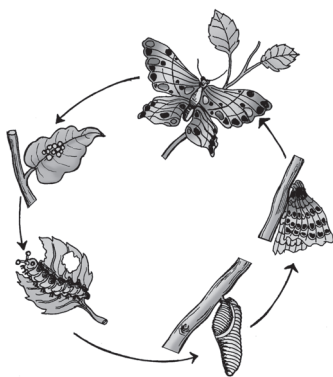
4. Match the following:

3

- | | | | |
|----|------------------|--|-----------------|
| a. | Temporary teeth | | 206 |
| b. | Skeletal system | | Tooth decay |
| c. | Bacteria | | Large intestine |
| d. | Sugar | | 20 |
| e. | Man | | energy giving |
| f. | Digestive system | | mammal |

5. Look at the picture and describe the life cycle of a butterfly:

4



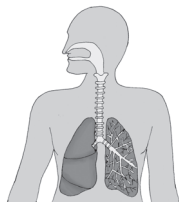
When the eggs of a butterfly, a tiny comes out. It looks like a and it is the stage. The caterpillar feeds on and grows. It then covers itself with a special thread like structure or case called a This stage is the stage. A few weeks later, this case breaks open and an comes out.

[worm, leaves, hatch, larval, caterpillar, cocoon, pupa, adult butterfly]

6. Write any two parts of the given system of our body:

6

a.



Consists of

.....
.....

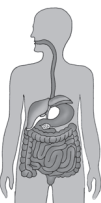
b.



Consists of

.....
.....

c.



Consists of

.....
.....

7. Give a reason for:

5

- a. Gases easily change their shape and volume :
- b. Roughage must be included in the diet :
- c. It is important to exercise :
- d. We should not eat food which is left open :
- e. The parent birds sit on the eggs :

8. Fill in the blanks:

5

- a. Molecules are made up of
- b. When we breathe outgoes out of the lungs.
- c. The place where one bone joins with another bone is called a
- d. The skin removes the waste material called
from our body.
- e. Frogs are called because they live on land and water.

Part - B

(Use separate answer sheets to write the answers)

9. Answer the following:

12

- a. What are molecules?
- b. Differentiate between chemical change and physical change.
- c. How can we protect our teeth from tooth decay? (give two points)
- d. What are the functions of
 - i. excretory system
 - ii. incisors
 - iii. muscles

10. Look at the activity and answer:

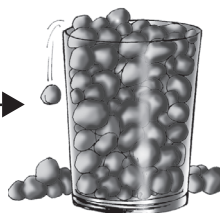
3

a.



What does this prove?

b. What does this prove? →



c.



What does this prove?

**SECOND TERMINAL EXAMINATION
STANDARD - 4**

Total marks
obtained
out of 50

SOCIAL STUDIES

Part - A

(Write the answers in the question paper itself)

Time : 2 hrs.
Marks : 50

1. Mark the following states in the map:-

4

(Andhra Pradesh, Gujarat, Jammu and Kashmir, Tamil Nadu)



2. Name the state for these dance forms :

4

- a. Tamasha -
- b. Yaksha Gana -
- c. Ottan Thullal -
- d. Garba -

3. Fill in the blanks:

5

- The home of the Asiatic lions is the famous.....
- The salt water lakes of the western coastal regions are called.....
- The famous Jaisalmer fort is in the state of.....
- Jaipur is known as
-go from place to place in search of food.

4. Match A to B to C:

10

A	B	C
States	Capitals	Languages
Gujarat	Bangalore	Konkani
Goa	Kolkata	Kannada
Karnataka	Shimla	Bengali
Paschim Banga	Gandhinagar	Pahari
Himachal Pradesh	Panaji	Gujarati

5. In which region will you find the following states? Tick the right answer:

5

- | | | |
|------------------|---|---|
| a. Assam | Central plateau <input type="checkbox"/> | Himalayan region <input type="checkbox"/> |
| b. Kerala | Southern plateau <input type="checkbox"/> | Central plateaus <input type="checkbox"/> |
| c. Karnataka | Western coastal region <input type="checkbox"/> | Central plateau <input type="checkbox"/> |
| d. Paschim Banga | Northern plains <input type="checkbox"/> | Southern plateau <input type="checkbox"/> |
| e. Rajasthan | Himalayan region <input type="checkbox"/> | Desert region <input type="checkbox"/> |

6. In which states are the following situated:

4

- Brindavan Gardens -
- Bodh Gaya -
- Kanchenjunga -
- Dal Lake -

7. Match the following:

3

a. Anand	Vihara
b. Boat race	Madhya Pradesh
c. Taj Mahal	Rajasthan
d. Nomads	milk
e. Bihar	Kerala
f. Khajuraho	Agra

8. Name the following:

5

- a. Home of clouds -
- b. Land of Rajahs -
- c. Famous for coral reefs -
- d. Underground railway -
- e. Largest diamond mine in India at -

Part - B

(Use separate answer sheets to write the answers)

9. Answer the following:

10

- a. What is Goa famous for?
- b. What soil is best suited for growing cotton? In which region is it found?
- c. What do houses in Rajasthan look like?
- d. What is the Indira Gandhi Canal?
- e. What is the main occupation of people of Tamil Nadu? What traditional dress do the men wear?

**ANNUAL EXAMINATION
STANDARD - 4**

Total marks
obtained
out of 50

ENGLISH

Part - A

Time : 2 hrs.
Marks : 50

(Write the answers in the question paper itself)

- 1. Write the opposite gender of : 3**
- a. Actor – b. Lord –
- c. Man – d. Cow –
- e. Monk – f. Father –
- 2. Make a sentence with each of the following words: 3**
- a. Must
- b. Can
- c. Could not
- 3. Rewrite the sentences using the short form: 3**
- a. It was raining all night.
- b. It is the best book I have read.
- c. It will come tomorrow.
- 4. Find the word: 4**
- a. A thing you use to see your face. R R
- b. The covering of an egg. E
- c. A good friend. C P I
- d. A place where a dog is kept. E L
- 5. Write the questions Rakesh asks Rina: 3**
- a. Rakesh:
- Rina: I have four sisters.
- b. Rakesh:
- Rina: No, thank you. We just had breakfast.
- c. Rakesh:
- Rina: We live in a big house.

6. Use the choices given and write an answer: 3

- a. I don't have money. Imy purse. (has lost, have lost)
- b. The team cannot play. They.....(has come, have come) late.
- c. Can he go home? He (has finished, will have finished) his work.

7. Use the following phrasal verbs correctly: 3

call off break down call on

- a. Wemy grandmother on our way home.
- b. The car on our way to school.
- c. The match was because of the rain.

8. Select the correct meaning: 3

- a. Fragrant – small piece sweet smelling
- b. Glared – looked scared stared angrily
- c. Duke – noble man slightly deaf

9. Read the passage and fill in the blanks: 5

I(stopped, ran) by Mr. Kumar's house one day and was greeted by a rather old looking dog. She was a gentle animal who (chased, wagged) her tail as she pushed her nose against my hand. "What's her.....(age, name)?" I asked. "I call her 'Dog Face,'" replied the old(dog, gentleman). "..... (How, Why)do you call her that?" I inquired. "Can't you understand ?" asked Mr. Kumar. "Not really." Mr. Kumar held the old animal's head in his hands. "If you (listen,look) at just the right angle, you can see that she has a dog's face" he (asked, explained). "But she *is* a.....(person, dog)!" I said. "Shhhh!" Mr. Kumar responded with the loudest whisper I have ever (found, heard) "Don't let her hear you say that!" I said (words,nothing), because I didn't know what to say.

10. State whether T or F:

2


- a. Lassie was not a friendly dog.
- b. The mouse shared the cake with everyone.
- c. Joe's family lived in the country of Yorkshire.
- d. Ostriches are found mostly in America.

Part - B

(Use separate answer sheets to write the answers)

11. Look at the picture of the house. Describe the house using at least three adjectives :

3



12. Write one of your favourite stories :

5

13. Answer the following questions:

2 x 5 =10

- a. Complete the following:
 - a. When Mother reads aloud, far lands.....
 - b. Joe's parents had to sell Lassie as
- b. Who said the following and to whom?
 - a. "It isn't Lassie. It's another that looks like her."
 - b. "Let's keep her this time."
- c. Why did the duke look at the dog's paws?
- d. Why did Lassie escape from the duke?
- e. Why did the doctor say "advise is too late"?

ANNUAL EXAMINATION STANDARD-4

Total marks
obtained
out of 50

Time : 2 hrs.
Marks : 50

മലയാളം

(ഉത്തരം ചോദ്യക്കടലാസിൽ തന്നെ എഴുതുക.)

1. പദപ്രശ്നം:

13

വലത്തോട്ട്

1. തന്റെ ബുദ്ധിശക്തികൊണ്ട് പ്രശസ്തനായ രാജാവ്.
2. വിനയം എതിർപദം.
3. കൃഷ്ണനും കുചേലനും സന്ദീപനി മഹർഷിയുടെആയിരുന്നു.
4. 'ക്ഷ'യിൽ തുടങ്ങുന്ന ഒരു നല്ല ഗുണം.
5. ആഗസ്റ്റ് 15
6. ഭൂമിയിൽ തീ എത്തിച്ച ആൾ.
7. ഇതുളളപ്പോൾ കൂടയില്ലാതെ പറ്റില്ല.

1		8		7	
	2				9
3			10		
4					
5					
	6				

താഴോട്ട്

1. കുളിക്കാൻ ഇതു കൂടി വേണം.
8. സന്ദീപനി ആയിരുന്നു.
7. മരം തുളച്ച് കൂടുണ്ടാക്കുന്ന പക്ഷി.
9. ഇ-മെയിൽ കണ്ടുപിടിച്ചതാര്.
10. 'അർത്ഥം' സമാനപദം.
5. ഭക്ഷണത്തിന് നല്ല

2. ഒറ്റയാൻ ഏത്?

3

- | | | | | |
|---------|--------|-------|------|-------|
| മന്ദിരം | ഗേഹം | അനലൻ | ആലയം | |
| നൂപൻ | കൃപാണം | ചഡ്ഗം | വാൾ | |

3. ഒറ്റപ്പദം എഴുതുക:

4

- a. മുതൽ നശിപ്പിക്കുന്നവർ. =
- b. തീർപ്പാക്കുന്നതിനുള്ള തീരുമാനം. =
- c. പ്രിയപ്പെട്ട ശിഷ്യർ. =
- d. തീയുടെ വെളിച്ചം. =

4. യോജിച്ച വാക്കുകൾ എഴുതി ഖണ്ഡിക പൂർത്തിയാക്കുക:

3+1½

ഒരു ദേവാലയത്തിൽ വലിയ നടക്കുകയാണ്. ആയിരം കത്തിച്ചുകൊണ്ടുള്ള ആഘോഷം. ഒരു മെഴുകുതിരിയിൽ നിന്നാണ് ബാക്കി മെഴുകുതിരികളെല്ലാം അപ്പോൾ ആദ്യത്തെ മെഴുകുതിരിക്ക് മുത്തു. ഞാൻ മെഴുകുതിരികളുടെ തന്നെ. പക്ഷെ അധികം ഏറ്റവുമധ്യം അത് കത്തിത്തീർന്നു.

a. ഈ കഥയുടെ ഗുണപാഠം എന്ത്?

.....

b. ഉത്സവം സമാനപദം -

PART - B

(ഉത്തരങ്ങൾ വേറെ പേപ്പറിൽ എഴുതേണ്ടതാണ്.)

5. ഉത്തരം എഴുതുക:

12½

- a. ആദ്യത്തെ സ്ത്രീ സോളമൻ രാജാവിനോട് എന്താണ് അപേക്ഷിച്ചത്?
- b. നല്ല ജനങ്ങൾ എന്താണ് ചിന്തിക്കുന്നത്?
- c. ഗുരു ഭാര്യയെ ശകാരിക്കാൻ കാരണമെന്ത്?
- d. തുരിയൻ തമ്പുരാൻ കാരിയം പറഞ്ഞപ്പം എന്താണുണ്ടായത്?
- e. പ്രോമിത്യൂസിന്റെ ഹൃദയത്തിന്റെ പ്രത്യേകത എന്തായിരുന്നു?

6. 'ധനത്തിനോടുള്ള അമിതമായ ആർത്തി മനുഷ്യനെ ആപത്തിലെത്തിക്കുന്നു' എന്ന ഗുണപാഠമുള്ള ഒരു കഥയെഴുതുക. 5

7. 'സൂര്യനെ'ക്കുറിച്ച് നിങ്ങളുടെ ഭാവനയ്ക്കനുസരിച്ചോ നിങ്ങൾക്കറിയാവുന്നതോ ആയ ഒരു കവിത എഴുതുക. 4

8. തപാലിൽ കത്തയയ്ക്കുന്നതും ഇ-മെയിൽ അയക്കുന്നതും താരതമ്യം ചെയ്യുക. 4

ANNUAL EXAMINATION STANDARD - 4

Total marks
obtained
out of 50

MATHEMATICS

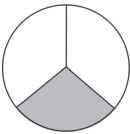

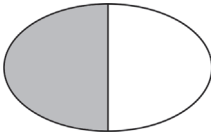

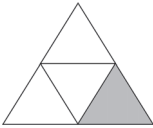
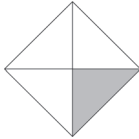
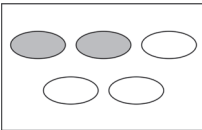

Part - A

Time : 2 hrs.
Marks : 50

(Write the answers in the question paper itself)

1. Write the fraction to represent the shaded parts and match to the equivalent fraction:

6

	<input style="width: 80px; height: 40px; border: 1px solid black;" type="text"/>	
	<input style="width: 80px; height: 40px; border: 1px solid black;" type="text"/>	
	<input style="width: 80px; height: 40px; border: 1px solid black;" type="text"/>	
	<input style="width: 80px; height: 40px; border: 1px solid black;" type="text"/>	

2. Fill in the blanks:

5

- a. Pictures that represent information are called
- b. To convert hours to minutes, multiply by
- c. February has days in a leap year.
- d. Quadrilateral is a polygon made of line segments.
- e. The length of the circle is called

3. Tick the correct option:

2

- a. $\frac{1}{7}$ is a fraction. improper unit
- b. $\frac{2}{7}$ and $\frac{5}{7}$ are fractions. like equivalent
- c. $\frac{9}{7}$ is an fraction. proper improper
- d. $6\frac{1}{7}$ is a fraction. mixed proper

4. Find the answer:

4

a. $\frac{3}{8} + \frac{2}{8} = \square$

b. $\frac{9}{17} - \frac{2}{17} = \square$

c. $\frac{2}{11} + \frac{1}{11} + \frac{3}{11} = \square$

d. $\frac{8}{9} - \frac{2}{9} = \square$

5. Fill in the blanks using <, > or =:

2

a. $\frac{5}{7} \square \frac{7}{7}$

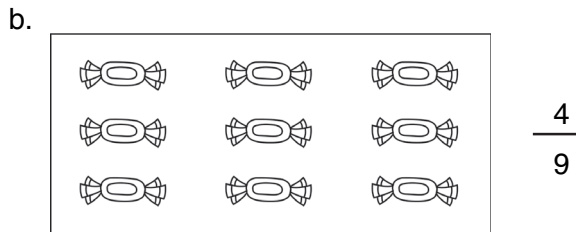

b. $\frac{9}{13} \square \frac{5}{13}$

c. $\frac{1}{2} \square \frac{2}{4}$

d. $\frac{1}{5} \square \frac{3}{5}$

6. Shade or colour according to the given fraction:

2



7. Tick the correct picture:

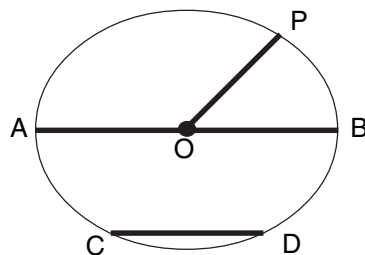
2



8. Fill in the blanks based on the figure given:

4

- a. O is the of the circle.
- b. OP is a of the circle.
- c. AB is a of the circle.
- d. CD is a of the circle.



9. Write the time in two ways as shown:

3

eg:



12 : 15

or

quarter past 12



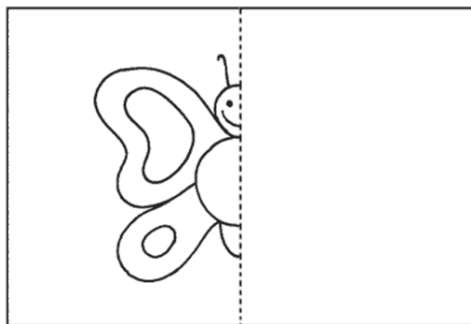
or



or

10. Complete the symmetrical figure:

2



Part - B

(Use separate answer sheets to write the answers)

11. List any 4 letters of the English alphabet which are symmetrical:

2

12. a. List the months which have 30 days:

2

b. Write in minutes:

3

a. 4 hours

b. 5 hours 25 minutes

c. Write in hours:

3

a. 360 minutes


b. 540 minutes

13. Do these problems:

a. A train leaves Kochi at 6.45 am and reaches Trissur at 8.10 am. How long does it take the train to reach Trissur? 2

b. A ticket seller sells 460 tickets a day. How many tickets would he sell in the month of January? 2

c. There are 400 mango trees, 500 coconut palms, 300 guava trees and 200 cashew trees in an orchard. Represent them in a pictograph.

key  = 100 trees

4

**ANNUAL EXAMINATION
STANDARD - 4**

Total marks
obtained
out of 50

SCIENCE

Part - A

Time : 2 hrs.
Marks : 50

(Write the answers in the question paper itself)

1. Identify these pictures and write the change of energy when it works: 6



..... to



..... to



..... to

2. Name the following: 6

- a. It stops us from floating in the air.
- b. This makes our work easier.
- c. The force that stops the rolling ball.
- d. Clothes that catch fire easily.
- e. The first help that an injured person needs
- f. Mixture of sand and clay

3. Match:

5

insect bites

tight bandage

burn

stored energy

bleeding

the smallest particle

battery

lime water

atom

antiseptic cream

4. Write true or false:

5

a. Keep the floors of your house wet.

b. Always cross the road at a zebra crossing.

c. When we push a wall, a work is done.

d. A force can change the direction of a moving body.

e. Running water has energy.

5. Name these simple machines. When do we use them?

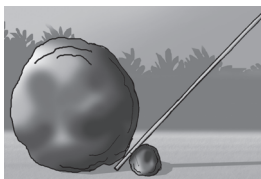
6



.....
.....
.....



.....
.....
.....



.....
.....
.....

- 6. Fill in the blanks:** **5**
- a. is the ability to do work.
 - b. A push or pull is called a
 - c. Always walk on the
 - d. Walk on the side of the road.
 - e. Our body stores energy in the form of

Part - B

(Use separate answer sheets to write the answers)

- 7. Give reason for :** **6**
- a. It is difficult to walk on a very smooth surface.
 - b. When we throw a ball up, it comes down.
 - c. Roots of mangrove plants grow upwards above the soil.
 - d. Do not crowd around an injured person.

- 8. Name and draw two sources of light energy :** **4**
- a. a natural source
 - b. an artificial source

- 9. Answer these questions:**
- a. Name three important kinds of soil. **1½**
 - b. In what ways can soil be conserved? **1½**
 - c. Name 4 sources of energy. **4**
 - d. What first aid should be given? **4**
 - a. for burns
 - b. for a person who has fainted

ANNUAL EXAMINATION STANDARD - 4

Total marks
obtained
out of 50

SOCIAL STUDIES

Part - A

Time : 2 hrs.
Marks : 50

(Write the answers in the question paper itself)

1. Tick the correct answer:

8

- a. Cows and bullocks are called live stock poultry .
- b. Better agricultural production is called white green revolution.
- c. Instant written messages : fax letter
- d. Babul trees are found in mountains deserts
- e. Indira Gandhi Canal : Kerala Rajasthan
- f. Vivekananda Memorial : Kanyakumari Perambur
- g. Most important food crop in India : rice wheat
- h. Mass media : telephone radio

2. Match A to B to C:

10

A	B	C
cotton	Sunderbans	Maharashtra
Royal Bengal Tiger	Computer	Paschim Banga
needle shaped leaves	Black soil	e-mail
Dams	control floods	Himalayan slopes
internet	pine, fir	multi purpose river valley projects

3. Fill in the blanks:

5

- a. is a popular and also the easiest means of communication.
- b. Rice grows well in and climate.
- c. Millets include and
- d. Dead and which are buried underground form and after long years.
- e. Trees of the forests do not shed their leaves all at once.

4. Read the clues and solve the crossword:

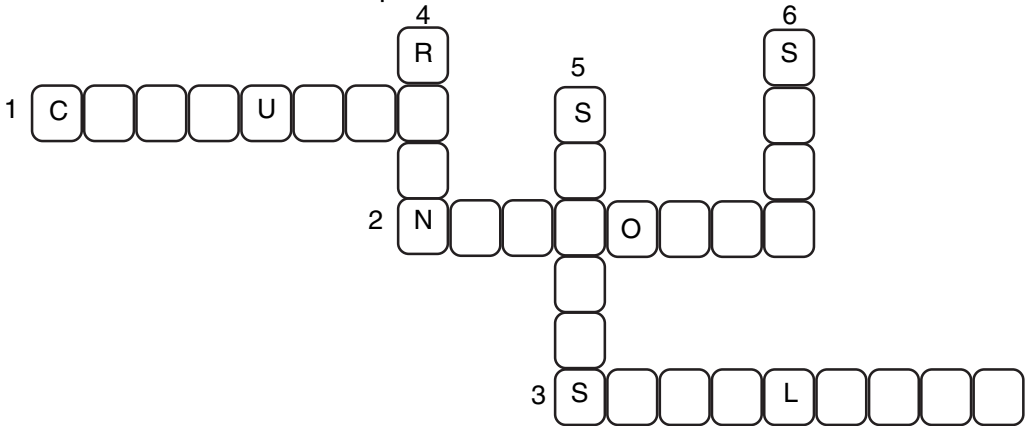
6

Across

1. Kolkata was earlier known as
2. Tiger is our animal.
3.communication helps us to see live programmes of events around the world.

Down

4. Main source of water
5. Cardamom, pepper, cloves are called
6. is the most important natural resource.



5. Write 'T' or 'F'. If false write the correct answer in the space given below: 6

- a. Telegrams are costly.
.....
- b. We import large quantity of marine products.
.....
- c. Sanctuaries protect wildlife.
.....
- d. Canals are built across rivers.
.....
- e. Tamilnadu lies in the Konkan coast.
.....
- f. We have only one fourth of our country under forests.
.....

6. Answer briefly:

6

a. What is mass media?

.....
.....
.....
.....

b. What is wildlife?

.....
.....
.....
.....

c. What is terrace farming?

.....
.....
.....
.....

Part - B

(Use separate answer sheets to write the answers)

7. Answer the following:

9

- a. What advantage does e-mail have over the ordinary letter sent by post?
- b. What crops grow well in alluvial soil? Where is alluvial soil chiefly found?
- c. What are animals killed illegally for?