

Question Bank

collection of model question papers

STANDARD-1



Publishers Pvt. Ltd.

IX/14-15, Kakkanad-Pallikkara Road, Athani, Kusumagiri.P.O., Kakkanad, Kochi-682 030

Phone : 0484-2429261, 3291869, 8594040422

E-mail: rainbowpublishers@ymail.com

Website: rainbowpublishersindia.com

FIRST TERMINAL EXAMINATION

STANDARD - 1

Total marks
obtained
out of 50

ENGLISH

Part - A

(Write the answers in the question paper itself)

Time : 2 hrs.
Marks : 50




- 1. Write one or many next to the picture:** **4**



- 2. Circle the items you would use to work in your garden:** **3**

spade chair cycle bucket hose

- 3. Complete each sentence using 'this' 'that' those' 'these':** **3**

- a.  is a car.
- b. are parrots. 
- c. is an aeroplane. 

- 4. Write one word with same sound:** **3**

bell mad cat

- 5. Put these words in correct column:** **3**

lemon	sunflower	lotus	mango	lily	apple
Fruit		Flower			
.....				
.....				
.....				

- 6. Where would you find these things?** **5**

pillow					study table					books					pens					bed				
Study room										Bedroom														
.....																							
.....																							
.....																							

7. Name the animals you see in the zoo:

3



.....

.....

.....

8. Match the pairs:

3



ball

saucer

fork

9. Tick what mother does:

2

a. She works in an office.

☐

b. She sits in the armchair.

☐

c. She cooks food for the family.

☐

10. Tick what grandmother does at home:

2

a. She tells stories.

☐

b. She goes to the office.

☐

c. She lays the table.

☐

11. Answer these questions:

3

a. Where is your house?

.....

b. Name two rooms in your house.

.....

c. Which is your favourite room?

.....

12. What are the sounds made by these animals?

2

barks

mews

neighs

trumpets

cat

horse

elephant

dog

13. Read the poem and answer the questions:

4

RABBIT HABIT

I have a rabbit habit.
I like to crunch and chew
On celery logs and carrot sticks,
And apple wedges, too.
I have a rabbit habit.
I like to chomp and munch
On crispy greens and juicy grapes.
Mmm...rabbit food for lunch!

- a. What is the rabbit habit?

.....

- b. Write one fruit and one vegetable the rabbit likes to eat.

.....

- c. Circle the picture of the rabbit.



- 14. Draw a big ball and a small ball and write the words below each picture: 4**

- 15. Draw a line and write leaf, thorn, and flower in correct places: 3**



- 16. Write three sentences about your garden: 3**

FIRST TERMINAL EXAMINATION STANDARD-1

Total marks
obtained
out of 50

Time : 2 hrs.
Marks : 50

മലയാളം

(ഉത്തരം ചോദ്യക്കടലാസിൽ തന്നെ എഴുതുക.)

1. ചിത്രങ്ങളുടെ പേര് എഴുതുക:

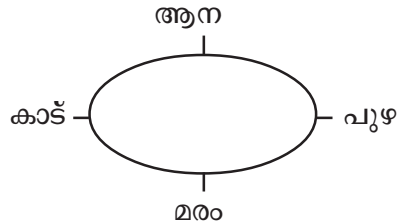
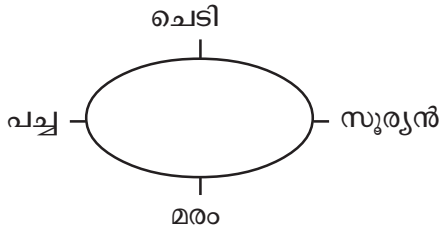
10



.....

2. പ്രധാനപദം എഴുതുക:

4



3. താഴെ തന്നിരിക്കുന്ന അക്ഷരങ്ങൾ ചേർത്ത് ആറ് പദങ്ങൾ എഴുതുക:

6

ഉ	റ	പ	ര
ത	ന	റ	
ആ	ല	വ	

.....

.....

.....

4. അടിയിൽ വരയിട്ടിരിക്കുന്ന അക്ഷരത്തിന് പകരം മറ്റൊരു അക്ഷരം എഴുതി നിങ്ങൾ പഠിച്ച മറ്റൊരു പദം എഴുതുക:

6

ഉദാ: കീടം - കീരി

ഇമ -

ആറ് -

കാട് -

ഋഷി -

ഉല -

കുമി -

5. കടങ്കഥയ്ക്ക് ഉത്തരം എഴുതുക: 4
- അഞ്ചു പക്ഷി കുടി മുട്ടയിട്ടു.
- അടയുടെയുള്ളിൽ പെരുമ്പട
6. മാതൃക നോക്കി പൂരിപ്പിക്കുക: 3
- പട - പടി ഉറ -
- വട - കറ -
7. ഒറ്റയാനെ കണ്ടെത്തി അടിയിൽ വരയിടുക: 4
- a. പുലി ആട് ആന ള്ഷി
- b. കാല് നൂല് പല്ല് നാവ്
- c. മരം തടി ഇല പുഴ
- d. ലീല ആടി ചാടി പാകി
8. അനുയോജ്യമായവ വരച്ച് യോജിപ്പിക്കുക: 5
- | | |
|------|------------|
| പുഴ | തുമ്പിക്കൈ |
| പീലി | വീട് |
| ഇല | മയിൽ |
| ആന | മീൻ |
| തറ | മരം |
9. പേരെഴുതുക: 8
- a. ഒരു അളവുപാത്രം.
- b. കരയിലെ ഏറ്റവും വലിയ മൃഗം.
- c. പേനയിൽ ഉപയോഗിക്കുന്നത്.
- d. ഒരു ഉരഗം.

FIRST TERMINAL EXAMINATION

STANDARD - 1

Total marks
obtained
out of 50

MATHS

Time : 2 hrs.
Marks : 50

Part - A

(Write the answers in the question paper itself)

1. Write in words: 3

40 -

80 -

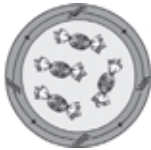
94 -

2. Write in numerals: 2

Sixty two - Seventy five -

Twenty seven - Nineteen -

3. Count and write the number of sweets: 3



.....



.....



.....

4. Write in fives: 2

10,,, 25, 30,,, 45

5. Write the number between: 3

6 8

1 3

4 6

6. Do these: 5

4 +	0 +	6 +	8 +	9 +
0	2	2	4	7
_____	_____	_____	_____	_____
=====	=====	=====	=====	=====

7. Write B for bigger and S for smaller:

3

a.



b.




c.



8. Write the missing number:

4



9. Fill up the empty boxes:

6

21	23	24	26
27	28	30	31
33	35	36	38

10. Find the number:

6

a. I have I G E H T books.

b. There are E V I F books on the table.

c. The dog has RUFO legs.

11. Look at the number line and write the number that comes after and before:

4



a. 4 comes before c. comes before 9.

b. 5 comes after d. comes after 6.

12. Count and write:

4

a.



+

=

b.




+

=

13. Join the number 1-50:

5



FIRST TERMINAL EXAMINATION

STANDARD - 1

Total marks
obtained
out of 50

SCIENCE

Time : 2 hrs.
Marks : 50

Part - A

(Write the answers in the question paper itself)

1. Draw a line from picture to word:

3



bud

leaf

fruit

2. Write true or false:

3

a. Trees can reproduce.

b. Roots grow below the soil.

c. All leaves are green.

3. Put the numbers 1-4 to show the correct order:

4



4. Write the name of the fruit:

3



.....

5. Choose the correct answer:

4

a. Sun is a living / non-living thing.

b. Brinjal is the fruit / seed of the plant.

6. In the picture, write root, stem, flower correctly:

6



7. Look at the picture and name four living things:

4



a.

b.

c.

d.

8. Cut the odd word out:

6

a. Rose

Sunflower

Lotus

Beans

b. Root

Tail

Leaf

Flower

c. Corn

Apple

Coconut

Milk

9. Tick the food we get from plants:

4

☐☐☐☐☐☐

10. Fill in the blanks:

3

water



fruits

breathe

- a. All living things can
- b. Plants need soil, sunlight and to grow.
- c. Flowers change into

11. Colour only rabbit's food:

4



12. Draw a non-living thing and name it:

6

FIRST TERMINAL EXAMINATION STANDARD - 1

Total marks
obtained
out of 50

SOCIAL STUDIES

Time : 2 hrs.
Marks : 50

Part - A

(Write the answers in the question paper itself)

1. Match the picture to the word:

6



door



uniform



raincoat

summer



winter

window



2. Choose the correct word and fill:

4

breakfast share woollen cotton

- a. In summer, we wear clothes.
- b. In winter, we wear clothes.
- c. I food with my friends.
- d. I eat every morning.

3. Put the items in the correct room:

4

pillow TV sofa bed

bedroom

drawing room

.....

.....

.....

.....

4. Fill in the missing letters:

4

- a. We get g from hens.
- b. oo gives us energy to work and play.
- c. When we feel thirsty, we drink a..... r.
- d. We go to s oo everyday.

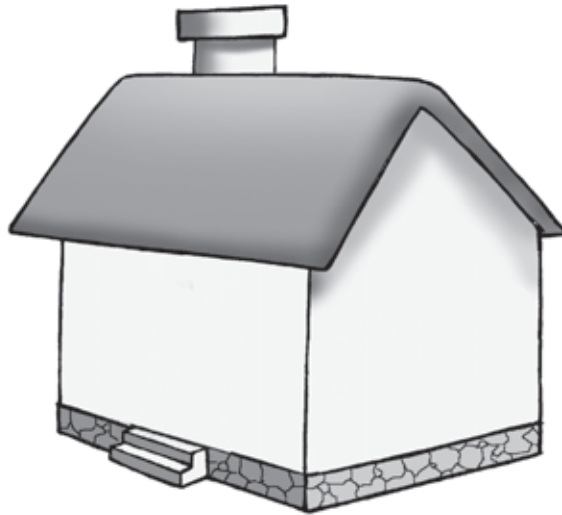
5. Tick the correct answer:

5

- a. We get coconut from (plants / animals).
- b. My house keeps me safe from (thieves / friends).
- c. My mother packs (milk / rice) for lunch.
- d. Raincoats are made of (wool / rexine).
- e. We eat (dinner / lunch) in the noon.

6. Draw a door, and two windows for the house. Name them:

5



7. What activity do you do in these rooms?

5

Bedroom	Eat food
Kitchen	Have a bath
Drawing room	Sleep
Bathroom	Cook food
Dining room	Receive guests

8. Colour the box blue if statement is correct:

6

a. We must always wear clean clothes.

☐

b. Fruits are not good for health.

☐

c. Plants and animals also need food.

☐

d. Clothes make us look smart.

☐

9. Write the words in correct place:

6

raincoat

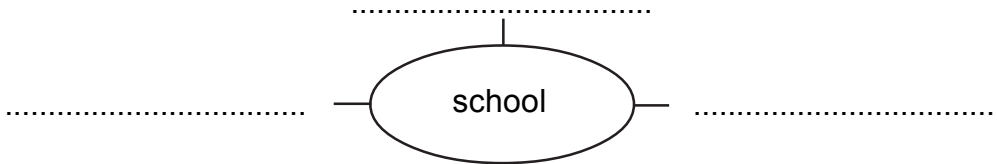
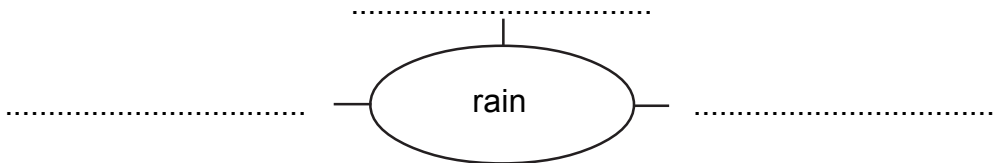
umbrella

uniform

shoes


wet

bag



10. Draw an umbrella and colour it:

5



SECOND TERMINAL EXAMINATION

STANDARD - 1

Total marks
obtained
out of 50

ENGLISH


Part - A

Time : 2 hrs.
Marks : 50


(Write the answers in the question paper itself)

1. What is it ?


4

- a.  It has hands but no legs.
It has a face but no eyes.
What is it?


.....

- b.  It has four legs.
People can sit on it..
What is it?

.....

- c.  It has many pages.
It tells us stories.
What is it?


.....

- d.  It is man's friend.
It has a tail.
What is it?

.....

2. Look at the picture and write four sentences about your classroom:

4



- a.is a blackboard in the classroom.
- b. There are.....
- c. The teacher
- d. There ison the wall.

3. Fill in blanks with have / has:

5

- a. My sister a beautiful doll.
- b. The children three balls.
- c. The giraffe a long neck.
- d. My brother and I new shoes.
- e. Rima a huge bag.

4. **Correct the spelling of underlined word:** 2
- a. We always have deseret after a meal.
- b. My sister is in the primery block.
5. **Write one rhyming word for each:** 4
- tame – fill –
- song – sit –
6. **Tick the things the teacher does in the school:** 3
- a. She tells the children stories. ☐
- b. She gives the children milk to drink. ☐
- c. She writes on the board. ☐
- d. She takes the children to the playground . ☐
- e. She shouts at the children. ☐
7. **Write the opposites:** 3
- Beautiful x Love x
- Large x
8. **Match the word with its meaning:** 5
- | | |
|------------|-----------|
| a. several | big |
| b. large | make |
| c. recite | beautiful |
| d. lovely | many |
| e. prepare | tell |
9. **Tick the correct answer:** 3
- a. My sister is tall. (he/ it/ she) has a cycle.
- b. The clock is broken. (he/ it/ she) is on the table.
- c. Today is grandfather's birthday. (he/ it/ she) is 75 years old.
10. **Do as given:** 3
- a. Write the name of a fruit starting with 'a'.
- b. Write the name of a vegetable starting with 'c'.
- c. Write the name of a colour starting with 'b'.
11. **Put the names of week in correct order:** 4
-, Monday, Tuesday,
-, Friday,

12. What are they doing?

2



The girl

My mother

13. Match the words :

3

a. buy

forgot

b. forget


went

c. go

bought

14. What can you see on the table? Write any four:

4



.....

.....

15. Who is your best friend?

1

.....

.....

SECOND TERMINAL EXAMINATION STANDARD-1

Total marks
obtained
out of 50

Time : 2 hrs.
Marks : 50

മലയാളം

(ഉത്തരം ചോദ്യക്കടലാസിൽ തന്നെ എഴുതുക.)

1. ചിത്രം നോക്കി പേരെഴുതുക:

7½



.....

2. ശരിയായ പദം ടിക് (✓) ചെയ്യുക:

4

a. പല് <input style="width: 40px; height: 30px; border: 1px solid black;" type="text"/>	b. കോടാലി <input style="width: 40px; height: 30px; border: 1px solid black;" type="text"/>	c. പൂക്കൾ <input style="width: 40px; height: 30px; border: 1px solid black;" type="text"/>	d. ചൊര <input style="width: 40px; height: 30px; border: 1px solid black;" type="text"/>
പല്ല് <input style="width: 40px; height: 30px; border: 1px solid black;" type="text"/>	കോലി <input style="width: 40px; height: 30px; border: 1px solid black;" type="text"/>	പൂക്കൾ <input style="width: 40px; height: 30px; border: 1px solid black;" type="text"/>	ചോര <input style="width: 40px; height: 30px; border: 1px solid black;" type="text"/>

3. പൂരിപ്പിക്കുക:

2½

പ	പൂ
പെ	പം

4. ആഭരണം അണിയിക്കാം: (റ, 1, 1, ു, ു, ൈ, ൈ, റ, ൈ, ു)

3

ര.....ത്ര.....യ.....യ..... ന.....ല.....വ് പരന്ന.....
അവര.....ടെ കളു.....യും ച.....ര.....യും ത.....ടർന്ന.....

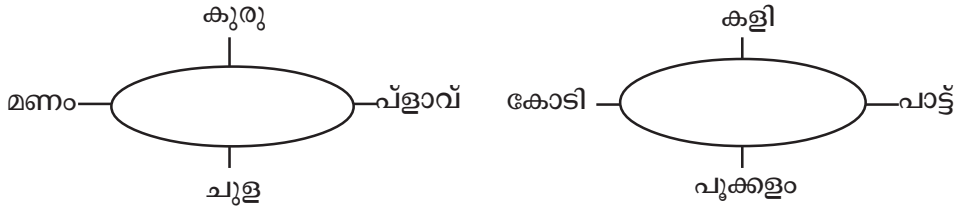
5. അനുയോജ്യമായവ വരച്ച് യോജിപ്പിക്കുക:

5

തെങ്ങ്	നിറം
വാച്ച്	കഞ്ഞി
ദിവസം	ഓല
മഞ്ഞ	സമയം
അരി	ഞായർ

6. പ്രധാനപദം എഴുതുക:

3



7. മാതൃകനോക്കി എഴുതുക:

5

ട - ട്ര - പട്ടം, കുട്ടി
 ത - -
 ണ - -

8. വിട്ടുപോയ ഭാഗം പൂരിപ്പിക്കുക:

7½

- കണ്ണൻ നോക്കി. (കണ്ണാടി, വാച്ച്)
- കർഷകൻ കതിർ (തിന്നു, കൊയ്തു)
- രാത്രിയായി. പരന്നു. (നിലാവ്, തണൽ)
- മത്തയിൽ പ്ലൂ വിരിഞ്ഞു. (മഞ്ഞ, വെള്ള)
- കുട്ടൻ തോട്ടത്തിൽ നട്ടു. (വെണ്ട, മത്ത)

9. കവിത പൂർണ്ണമാക്കുക:

2½

മുറ്റത്തെ പു വിടർന്നു.
 മണം പറന്നു നീളെ.
 നീല പാലൊളിയിൽ.
 തൂവെള്ള താരകളായ്.

10. ഒറ്റവാക്കിൽ ഉത്തരം എഴുതുക:

10

- ആരാണ് പാൽ വിൽക്കുന്നത്?
- പൂവിൽ നിറഞ്ഞത് എന്ത്?
- കേരളത്തിൽ കണ്ടു വരുന്ന ഒരു ഫലവൃക്ഷം?
- വിത്ത് പാകിയത് ആര്?
- വെളുപ്പ് നിറമുള്ള പൂവ്?

SECOND TERMINAL EXAMINATION STANDARD - 1

Total marks
obtained
out of 50

MATHEMATICS

Time : 2 hrs.
Marks : 50

Part - A

(Write the answers in the question paper itself)






1. Write the numerals for these ordinal numbers: 4

- a. ninth - c. seventh -
b. sixth - d. first -

2. Write the numbers from 61 to 70: 4

61					66				
----	--	--	--	--	----	--	--	--	--

3. Tick the boxes with number of pencils greater than three: 3

	<input type="checkbox"/>		<input type="checkbox"/>
	<input type="checkbox"/>		<input type="checkbox"/>
	<input type="checkbox"/>		

4. Write in tens in number and words: 4

20	Twenty

5. Write the numbers: 4

- a. Forty four
b. Ninety five
c. Sixty
d. Fifty eight

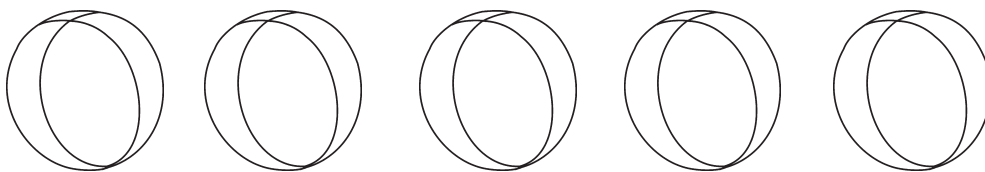
6. Write in ascending order: 4

13 12 6 20 9



7. Follow the instructions:

4



- Colour the second ball.
- Draw a circle around the fifth ball.
- Cut the fourth ball.
- Put a ü on the first ball.

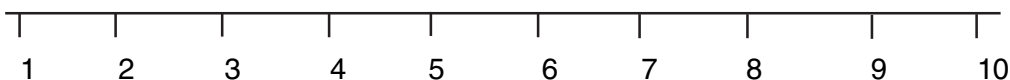
8. Fill in the boxes with $<$, $>$ or $=$:

5

- 77 85
- 48 34
- 65 56
- 38 38
- 98 97

10. Look at the number line and answer the questions:

3



- What comes just before 5 ?
- What comes just after 7 ?
- What comes just after 0 ?

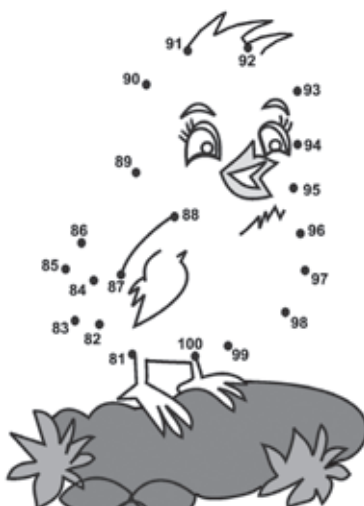
11. Subtract the following:

4

- $6 - 3 =$
- $12 - 5 =$
- $5 - 2 =$
- $6 - 6 =$

12. Join the dots from 80 to 100 and find who is hiding here:

2



13. Fill in the blanks:

5

a. $5 + 3 = \dots\dots\dots$

b. $7 + \dots\dots\dots = 9$

c. $1 - 1 = \dots\dots\dots$


d. $3 + 3 = \dots\dots\dots$

e. $7 - \dots\dots\dots = 5$

14. Do as directed:

2

a.



There wereballoons.

.....balloons burst.

How many balloons are left?

balloons.

b.



.....flowers.

.....flowers.

How many flowers are there together?

flowers.

SECOND TERMINAL EXAMINATION STANDARD - 1

Total marks
obtained
out of 50

SCIENCE

Part - A

(Write the answers in the question paper itself)

Time : 2 hrs.
Marks : 50

1. How many legs do these animals have?


4



.....

2. What are these children doing?

4



.....

3. Answer these questions in a few words:

3

a. How many times do you brush your teeth in one day?

.....

b. Do you do exercise everyday?

.....

c. What do you do when you are tired?

.....

4. Label the parts marked:

4



5. Put '3' or 'X':

5

- a. Drink plenty of clean water.
- b. All animals have four legs.
- c. A caterpillar becomes a butterfly.
- d. I have one stomach.
- e. Have a bath only once a week.

<input type="checkbox"/>
<input type="checkbox"/>
<input type="checkbox"/>
<input type="checkbox"/>
<input type="checkbox"/>

6. Choose the correct answer and write it:


4

tame	swimming	feathers	legs
------	----------	----------	------

- a.is a good exercise.
- b. A bird's body is covered with
- c. Animals that live with us are calledanimals.
- d. I walk with my

7. Draw a circle around the wild animals:

3



8. What are these?

4

- | | | | |
|--------------|----------|----------|-------|
| a. butterfly | mosquito | housefly | |
| b. crow | pigeon | peacock | |
| c. horse | cat | lion | |
| d. toes | nose | hands | |

9. Colour the box blue of animal that can swim:

3


☐

☐

☐

☐

☐

☐

10. Draw a line from the mother to its baby:

4



11. Name in twos:

4

- a. Animals that lay eggs.
- b. Animals that live on land and water.


12. Ram goes to school everyday. Tick the good habits he has:

4

- a. He wakes up late.
- b. He bathes two times everyday.
- c. He drinks plenty of clean water.
- d. He does not play.
- e. He wears clean clothes.
- f. He drinks milk everyday.

13. Colour the picture. What is the hen sitting on?

4



SECOND TERMINAL EXAMINATION STANDARD - 1

Total marks
obtained
out of 50

SOCIAL STUDIES

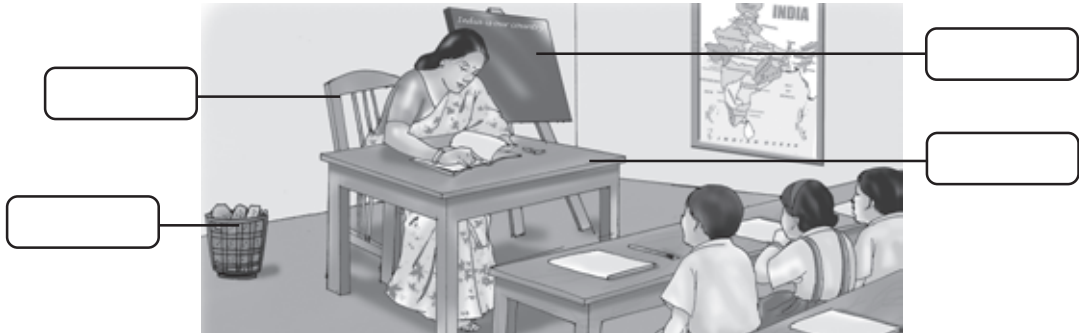
Part - A

(Write the answers in the question paper itself)

Time : 2 hrs.
Marks : 50

1. Name any four things you see in the classroom:

4



2. Name the people:

4

- | | |
|--|---------------|
| a. A person who teaches you. | t h....r |
| b. A person who sells vegetables. | gr.... gr.... |
| c. A person who keeps people's money safe. | b k |
| d. A person who rings the bell at school. | p |

3. Fill in the blanks:

5

(wild animals, manners, thieves, library, webs)

- a. A policeman catches
- b. Spiders live in
- c. There are many books to read in the school
- d. We learn good habits andat school.
- e.live in the forest.

4. Match the following:

5

- | | |
|--------------|----------|
| a. buffalo | mice |
| b. hen | tree |
| c. cat | domestic |
| d. monkey | school |
| e. principal | coop |

5. Draw a circle around the people who work in your school:

3



6. What do you do at school? Tick(P)the right pictures and cross(X)the wrong ones:

2


☐

☐

☐

☐

☐

☐

7. These children want to buy some things. Where to go? Draw a line from the child to the shop:

6

flour
rice
salt

Ahmed



cakes
bread

Mary



carrots
potatoes

Arun



8. Put these animals in their homes:

4

	<div>nest</div>	<div>land and water</div>		<div>den</div>	<div>shed</div>
Cow	→	<div></div>	Lion	→	<div></div>
Duck	→	<div></div>	bird	→	<div></div>

9. Write 'T' for true and 'F' for false:

5

- a. Parents help children with their studies.
- b. Children should not help to lay the table.
- c. A tent is a house made of ice.
- d. A caravan is a house on wheels.
- e. The children can also help their parents at home.

10. Answer the following:

8

- a. Who are the members of your family?
.....
.....
- b. What are strong houses made of?
.....
.....
- c. Who controls the school?
.....
.....
- d. What do you play in the playground?
.....
.....

11. Draw a house with a flat roof :

4

ANNUAL EXAMINATION STANDARD - 1

Total marks
obtained
out of 50

ENGLISH

Part - A


(Write the answers in the question paper itself)

Time : 2 hrs.
Marks : 50

1. Tick in the box what did Rinku buy from:

3


a. The baker



b. The chemist



c. The greengrocer



2. Complete the sentences:

4

a. I have

b. The children

3. Choose any letter and make new words:

4

a	b	e	i	n	t	g
s	r	w	l	q	z	m

a. b. c. d.

4. Tick the correct answer:

4

a. The boys (cannot, are not) playing.

b. We (do not, are not) in the room.

5. Match the words with similar sounds:

4

a. play

pill

b. ten

pot

c. cot


clay

d. fill

pen


6. Use 'those' and 'these' to fill in blanks:

3

a. are my books.

b. I want biscuits.



c. grapes are not good.

7. Write a colour word in each blank:

3

a. She has long, hair.

b. I can see the sky outside.

c. The boys played on the grass.

8. Write the opposite of these sentences:

4

a. My mother likes bread. Ibread.

b. My umbrella is not colourful. Your umbrella is

9. Find the word and draw it :

6

a. l e f a	b. p l a p e

10. What are these groups of animals called?

4

pack	herd	school	litter
------	------	--------	--------

a. A of fish.

c. A of puppies.

b. A of cattle.

d. A of wolves.

11. Look at the pictures and write the festival. Choose from the words given: 3



.....



.....



.....

Christmas

Holi

Vishu

Onam

Diwali

12. Write your answer using the word:

a. Where is the child? (with)

The child

b.



Where is the girl? (under)

The girl.....



4

13. Colour the words describing them:

4

a.



b.



big	happy	white
black	small	sad

fat	thin	broken
green	tall	small

ANNUAL EXAMINATION STANDARD-1

Total marks
obtained
out of 50

Time : 2 hrs.
Marks : 50

മലയാളം

(ഉത്തരം ചോദ്യക്കടലാസിൽ തന്നെ എഴുതുക.)

1. ചിത്രങ്ങൾ നോക്കി പേരെഴുതുക:

5



2. താഴെ കൊടുത്തിരിക്കുന്ന അക്ഷരം വരുന്ന ഓരോ പദം എഴുതുക:

4

ന്ത - ഖ -
ഛ - ഡ -

3. അനുയോജ്യമായവ തമ്മിൽ വരച്ച് യോജിപ്പിക്കുക:

5

നാശം

പല്ലി

ഫലിതം

പാട്ട്

ഗാനം

പാമ്പ്

തൂണും

തമാശ

ഗൗളി

പുല്ല്

4. ശരിയായ പദം ടിക് '✓' ചെയ്യുക:

3

a. ധനം

☐

b. ടക്ക

☐

c. മേഖം

☐

ദനം

☐

ഡക്ക

☐

മേഘം

☐

5. ബ്രാക്കറ്റിൽ നിന്നും ശരിയുത്തരം തെഞ്ഞെടുത്തെഴുതുക:

5

(ബോട്ട്, ഭാരതം, കമ്മൽ, ചിങ്ങം, ഛായ)

a. കണ്ണാടിയിൽ നോക്കിയാൽ കാണുന്നത്.

b. ആദ്യത്തെ മലയാളമാസം.

c. കാതിലണിയുന്ന ആഭരണം.

d. നമ്മുടെ നാട് (രാജ്യം).

e. വെള്ളത്തിൽ സഞ്ചരിക്കുന്ന ഒരു വാഹനം.

6. ഒറ്റയാനെ കണ്ടെത്തി വളയത്തിലാക്കുക: 2
- a. കന്നി തുലാം ജനുവരി മീനം
- b. നായ പുലി പശു പൂച്ച
7. ചിത്രങ്ങളുടെ പേരെഴുതി അനുയോജ്യമായവ കണ്ടെത്തി യോജിപ്പിക്കുക: 6



മീൻ



കണ്ണ്

ഫാൻ



പല്ല്



8. ശരിയായ ചിഹ്നം ചേർത്ത് പൂരിപ്പിക്കുക: 4
- a. മ ഡൻ (,)
- b. ത ക് (,)
- c. വ മി (,)
- d. ച കം (,)
9. ഉദാഹരണം നോക്കി എഴുതുക: (വെണ്ട - വേണ്ട) 2
- a. ചെമ്പ് -
- c. കെട്ടു -
10. കടങ്കഥയ്ക്ക് ഉത്തരം എഴുതുക: 4
- a. കണ്ടാൽ കഴമ്പ് കാര്യത്തിൽ തോല്പ്.
- b. ഇവിടെ ഞെക്കിയാൽ അവിടെ കറങ്ങും.

PART - B

(ഉത്തരങ്ങൾ വേറെ പേപ്പറിൽ എഴുതേണ്ടതാണ്.)

11. ഖണ്ഡിക വായിച്ച് തന്നിരിക്കുന്ന ചോദ്യങ്ങൾക്ക് ഉത്തരം എഴുതുക: 2
- അച്ഛൻ മിറായി കൊണ്ടുവന്നു. മീനയ്ക്കു സന്തോഷമായി. അവർ അപ്പുവിനും അമ്മുവിനും മിറായി നൽകി. അവർ ഒന്നിച്ച് റേഡിയോയിൽ സംഗീതം കേട്ടു. പിന്നെ അവർ പഠിക്കുവാൻ ഇരുന്നു. മുത്തച്ഛൻ പറയാറുള്ളത് അവർ ഓർത്തു. പഠിക്കാത്തവൻ മുഡൻ.
- a. അച്ഛൻ മിറായി കൊണ്ടുവന്നു. (ചോദ്യം നിർമ്മിക്കുക) 2
- b. മീന ആർക്കൊക്കെ മിറായി നൽകി? 1
- c. മുത്തച്ഛൻ എന്താണ് പറയാറുള്ളത്? 1
12. ഒറ്റവാക്കിൽ ഉത്തരം എഴുതുക: 6
- a. മലയാള വർഷത്തിൽ എത്ര മാസങ്ങളുണ്ട്?
- b. മാലതി ടീച്ചറുടെ ചോദ്യത്തിന് ശരിയുത്തരം പറഞ്ഞതാര്?
- c. ജലജയുടെയും അച്ഛന്റെയും യാത്ര ഏത് വണ്ടിയിലാണ്?
- d. കേരളീയർ എല്ലാവരും കണ്ടിട്ടുള്ള സസ്യം ഏത്?

ANNUAL EXAMINATION STANDARD - 1

Total marks
obtained
out of 50

MATHEMATICS

Part - A

(Write the answers in the question paper itself)

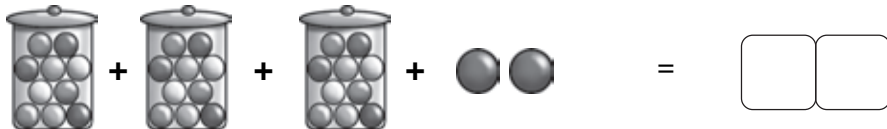
Time : 2 hrs.
Marks : 50

1. Count in tens and ones and write the number: 3

a.



b.



2. Circle the greatest number and cross out smallest number: 2

81, 17, 55, 98, 15, 32, 6

3. Write in words: 2

a. 48 –

b. 91 –

4. Write the numerals: 2

a. sixty two – b. fifty nine –

5. Fill in the blanks: 5

a. 1 rupee = paise.

b. There are days in a week.

c. There are months in a year.

d. 8 tens + 7 ones =

e. 5 tens + 0 ones =

6. Match the following:

5

$10 + 10$

10

$20 - 10$

9

$10 + 5$

20

$10 - 1$

50

$50 + 0$

15

7. Complete the days and months:

3

a. S.....nd.....

b. T.....sd.....

c. F.....i.....y

d. F.....ru.....y

d. No.....m.....r

e. Au.....s.....

8. Tick the group of coins that make 1 rupee:

2


☐

☐

9. Add the following:

8

a. $\begin{array}{r} 62 \\ + 5 \\ \hline \end{array}$

b. $\begin{array}{r} 38 \\ + 41 \\ \hline \end{array}$

c. $\begin{array}{r} 27 \\ + 6 \\ \hline \end{array}$

d. $\begin{array}{r} 43 \\ + 17 \\ \hline \end{array}$

$+$

$+$

$+$

$+$

10. Subtract: 8

a. $\begin{array}{r} 39 \\ - 7 \\ \hline \end{array}$

b. $\begin{array}{r} 68 \\ - 24 \\ \hline \end{array}$

c. $\begin{array}{r} 41 \\ - 8 \\ \hline \end{array}$

d. $\begin{array}{r} 52 \\ - 16 \\ \hline \end{array}$

$-$

$-$

$-$

$-$

11. Anu had 12 sketch pens with her. Her uncle gives her 5 more sketch pens. How many sketch pens are there together with her? 3

No. of sketch pens Anu had =

No. of sketch pens she got =

Total No. of sketch pens =

Ans : sketch pens.



12. There are 18 mangoes on a tree. 7 mangoes fall down. How many mangoes are left on the tree? 3

No. of mangoes on the tree =

No. of mangoes that fell down =

No. of mangoes left =

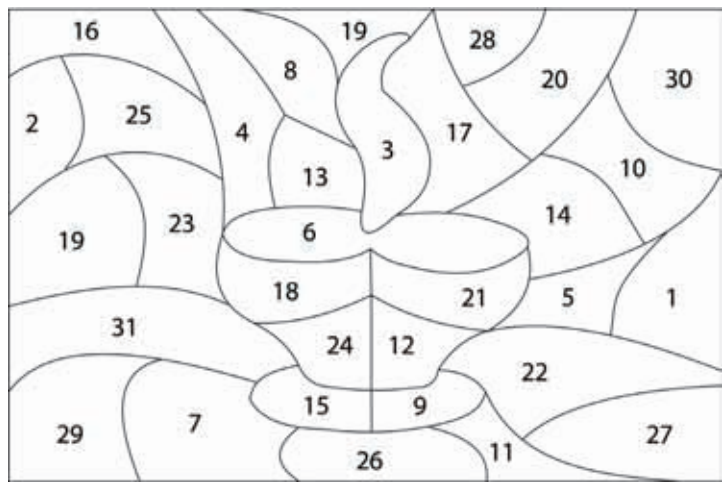
Ans : mangoes



13. Write the missing numbers: 2+2

1	2		4	5		7	8
	10	11		13	14		16
17		19	20		22	23	

Now shade or colour the boxes having the missing numbers:



ANNUAL EXAMINATION STANDARD - 1

Total marks
obtained
out of 50

SCIENCE

Part - A

(Write the answers in the question paper itself)

Time : 2 hrs.
Marks : 50

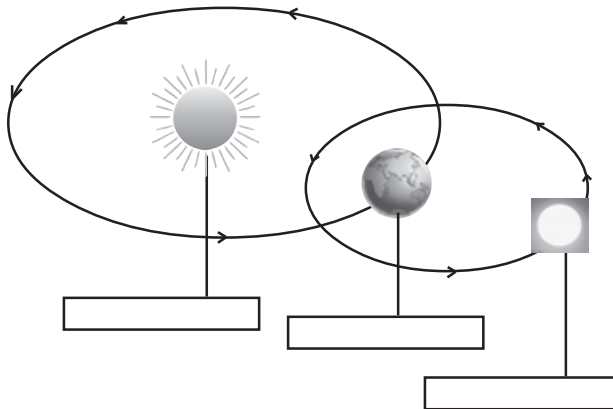
1. Tick the correct answer:

6

- | | | |
|--|---------------------------------|--------------------------------|
| a. We can air. | see <input type="checkbox"/> | feel <input type="checkbox"/> |
| b. Fish will if taken out of water | die <input type="checkbox"/> | live <input type="checkbox"/> |
| c. The water in the sea is | sweet <input type="checkbox"/> | salty <input type="checkbox"/> |
| d. When air moves it is called | rain <input type="checkbox"/> | wind <input type="checkbox"/> |
| e. has no light of its own | moon <input type="checkbox"/> | sun <input type="checkbox"/> |
| f. The earth takes to spin round once. | 1 year <input type="checkbox"/> | 1 day <input type="checkbox"/> |

2. Name these objects:

6



3. Write true or false:

4

- | | |
|---------------------------------|-------|
| a. Earth is surrounded by air. | |
| b. There is no air on the moon. | |
| c. Plants do not need air. | |
| d. Cow is a water animal. | |

4. Use the pictures to fill in the blanks:


5

a. We live on




b. needs air to live.

c. needs air to move.



d. are very far from us.

e. Some times has a crescent shape.



5. Draw 3 different shapes of moon:

6

--	--	--

6. Name (any three):

9

a. Sources of water,,

b. Uses of water,,

c. Things that need water and air to live.,,

7. Match:

5




rain

moving air

day

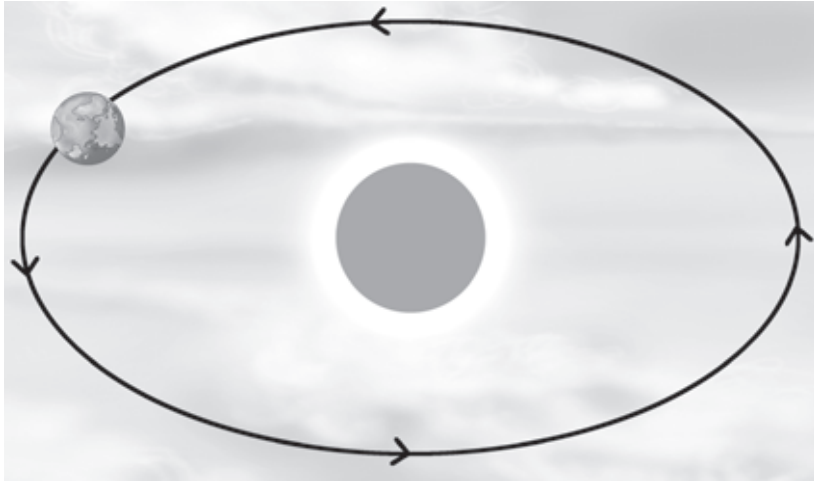
night

water plant



8. Complete the sentences about the sun with correct word from jumbled letters:

5



The (UNS) is a (RTAS).....
It is bigger than the (RATHE) It gives (EHAT)
..... and light. Earth takes one (AREY)
to go round the sun.

9. Colour all the seas blue and land green:

4



ANNUAL EXAMINATION STANDARD - 1

Total marks
obtained
out of 50

SOCIAL STUDIES

Part - A

(Write the answers in the question paper itself)

Time : 2 hrs.
Marks : 50

1. Put the correct words under the 2 pictures:

8



.....
.....
.....
.....

.....
.....
.....
.....

Onam, King of Kerala, Santa Claus, Christmas, Mahabali,
birth of Jesus Christ, 25th December, harvest festival

2. Look at each picture. Tick 2 correct options:

6



- | | | | | | |
|-----------------|--------------------------|-----------------|--------------------------|-------------------|--------------------------|
| moves in air | <input type="checkbox"/> | runs on tracks | <input type="checkbox"/> | very costly | <input type="checkbox"/> |
| moves in water | <input type="checkbox"/> | runs on water | <input type="checkbox"/> | very cheap | <input type="checkbox"/> |
| has many wheels | <input type="checkbox"/> | has four wheels | <input type="checkbox"/> | to distant places | <input type="checkbox"/> |
| has no wheels | <input type="checkbox"/> | has many wheels | <input type="checkbox"/> | to nearby places | <input type="checkbox"/> |

3. Number them from the smallest to biggest. The first one is marked:

4

city

village

country

world

state

4. Fill in the blanks:

10

- a. Festivals bring people
- b. During Onam, we make carpets in front of our homes.
- c. People should obey traffic.....
- d. Do not on the road.
- e. We should throw garbage only in a
- f. The is made up of many countries.
- g. Flat land is called
- h. To go to space are used.
- i. People of different countries wear different kinds of
and speak different

5. Tick in the right box:

6

- a. Go when the light is green. should do ☐ shouldn't do ☐
- b. Talk loudly and shout should do ☐ shouldn't do ☐
- c. Lean out of the window of bus should do ☐ shouldn't do ☐
- d. Always walk on the footpath should do ☐ shouldn't do ☐
- e. Say 'Good morning' when we meet someone- should do ☐ shouldn't do ☐
- f. Play on the road should do ☐ shouldn't do ☐

6. Fill in the blanks about your country and state:

6

- a. is my country.
- b. New Delhi is the of India.
- c. is my state.
- d. I speak
- e. We eat
- f. is the capital of my state.

7. Match the two boxes:

6

- | | |
|---------------------------------|----------------|
| a. water, ice and land | valley |
| b. land between two mountains | zebra crossing |
| c. magic word | earth |
| d. help given to injured person | please |
| e. high land | first aid |
| f. cross only at the | hill |

8. Draw picture of mountain, river and valley. Colour it:

4

