

# Our Little World

## Question Bank

### UKG



**RAINBOW**  
PUBLISHERS PVT. LTD.  
*Value Education*

IX/14-15, Kakkanad-Pallikkara Road, Athani  
Kusumagiri P.O., Kakkanad, Kochi-682 030.  
Phone: 0484-2429261, 9072391869, 8594040422

We present herewith  
the model question papers for  
UKG (Our Little World).

The question papers for the  
term exams will be in colour  
and the unit tests in black  
and white.

# FIRST TERMINAL EXAMINATION UKG

Time : 2 hrs  
Max. Marks : 25

Total Marks  
Obtained  
out of 25

## Our Little World - English

(Model Question Paper)

1. Write the missing capital letters: 2

A ..... C ..... F G ..... I

2. Write the missing small letters: 2

k ..... m ..... p q ..... s

3. Fill in with 'a, e, i, o, or u': 2½



b ..... g t ..... p s ..... n p ..... n b ..... n

4. Write 'He, She or It' under each picture: 6



.....

.....

.....



.....

.....

.....

4. Fill in with 'this' or 'that':

3

a. .... is a cap.



b. .... is a horse.

c. .... is a bat.



5. Fill in with 'these' or 'those':

3

a. .... are bees.



b. .... are girls.

c. .... are caps.



6. Name each picture. Write 'a' or 'an' before its name:

5

eg.:



an elephant



..... k ... y ..... d ... g ..... o ... l ..... b ... ll ..... a ... t

7. Match the words that sound the same:

1½

bat

toy

boy

cat

hill

bill

# FIRST TERMINAL EXAMINATION UKG

Time : 2 hrs  
Max. Marks : 25

Total Marks  
Obtained  
out of 25

## Our Little World - Mathematics

(Model Question Paper)

### 1. Tick the correct picture:

4

a. The tall person

b. The big animal

c. The thick book

d. The boat with less children


### 2. Write the numbers from 1-20:

4


<b>1</b>	....	....	....	....	....	....	....	....	<b>10</b>
<b>11</b>	....	....	....	....	....	....	....	....	<b>20</b>

### 3. Circle the correct number:

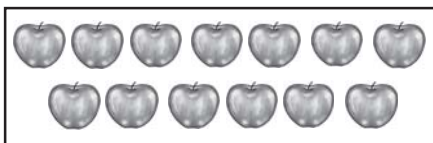
4




**5    6    7**



**7    8    9**





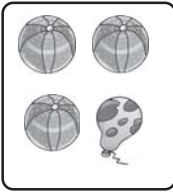
**11    12    13**



**15    16    17**

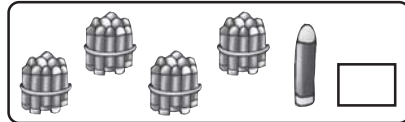

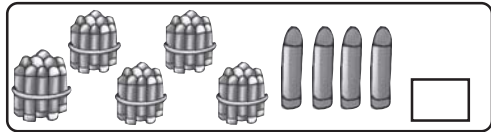
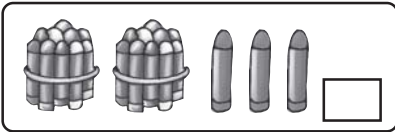
4. Cross out the ones that do not belong:

3




5. Count and write the number:

4




6. Count and write how many of each:

2



7. Join the dots from 31 - 50:

4



# FIRST TERMINAL EXAMINATION UKG

Total Marks  
Obtained  
out of 25

**Our Little World - EVS**

(Model Question Paper)

Time : 2 hrs  
Max. Marks : 25

1. Look at each picture and fill in the body part:

6



h .... i r



e y .....



n .... c k



t e .... t h



l .... g



h .... n d

2. Tick the things you use to keep clean:

5



3. Match picture to its name:

6



papaya



apple



radish



cherries



ginger



pumpkin

4. Tick only those we get from plants / trees:

4



5. Circle the correct word:

4

- a. My teeth / hands help me to chew food.
- b. My feet / arms help me to walk.
- c. We can eat carrot / pumpkin raw.
- d. Radish / Chikoo grows underground.



# SECOND TERMINAL EXAMINATION UKG

Total Marks  
Obtained  
out of 25

## Our Little World - English

(Model Question Paper)

Time : 2 hrs  
Max. Marks : 25

**1. Tick its colour. And write the name. An example is given: 8**



pink  yellow  black  white  blue  red

Rose

.....

.....

.....



brown  white  white  green

.....

.....

**2. Read each word. Put them in the correct box: 8**

sun, cot, girl, ship, camel, goat, soap, grapes

Write the words that begin with:


c	g	s
<p>.....</p> <p>.....</p> <p>.....</p>	<p>.....</p> <p>.....</p> <p>.....</p>	<p>.....</p> <p>.....</p> <p>.....</p>

**3. Look at the pictures and write answers:**

**3**

a. Is this a mango?

....., it is.



b. Is this a goat?

....., it is not. It is a .....

c. Is that a bus?

....., it is.



**4. Circle the words that sound the same:**

**3**


a. can                                      pan                                      mat

b. hit    pat    sit

c. goat    boat    rose


**5. Fill in with the action words:**

**3**

a.  The cat is ..... milk.  
(eating/drinking)

b. The child is ..... (smiling / crying)



c.  The bird is ..... (walking / flying)

# SECOND TERMINAL EXAMINATION UKG

Time : 2 hrs  
Max. Marks : 25









Total Marks  
Obtained  
out of 25

## Our Little World - Mathematics

(Model Question Paper)

### 1. Count and fill the box:

6

 <input style="width: 40px; height: 30px; border: 1px solid black;" type="text"/>	+	 <input style="width: 40px; height: 30px; border: 1px solid black;" type="text"/>	=	 <input style="width: 40px; height: 30px; border: 1px solid black; text-align: center; font-size: 1.2em;" type="text" value="5"/>
 <input style="width: 40px; height: 30px; border: 1px solid black;" type="text"/>	+	<input style="width: 40px; height: 30px; border: 1px solid black;" type="text"/>	=	 <input style="width: 40px; height: 30px; border: 1px solid black;" type="text"/>
 <input style="width: 40px; height: 30px; border: 1px solid black;" type="text"/>	+	 <input style="width: 40px; height: 30px; border: 1px solid black;" type="text"/>	=	 <input style="width: 40px; height: 30px; border: 1px solid black;" type="text"/>

### 2. Fill in with >, < or =:

3

$8 \quad \square \quad 11$

$12 \quad \square \quad 14$

$81 \quad \square \quad 81$

$6 \quad \square \quad 3$

$90 \quad \square \quad 80$

$63 \quad \square \quad 61$


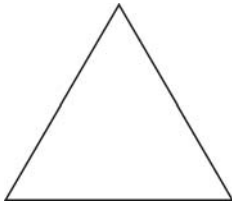
### 3. Add:

5

5	3	2	1	4
+ 4	+ 7	+ 4	+ 6	+ 0
_____	_____	_____	_____	_____
=====	=====	=====	=====	=====

4. Give colour to these shapes. Tick the name:

3



triangle

square

triangle

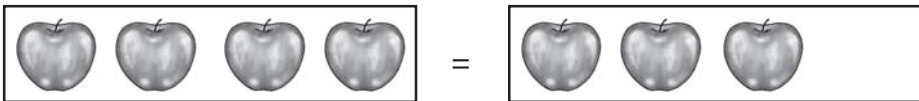
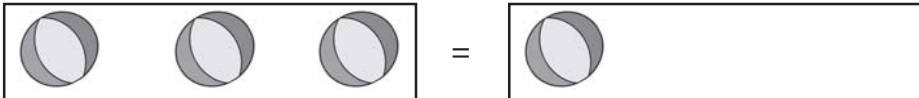
square

rectangle

circle

5. Make both sides equal by drawing the objects:

4




6. Count and write number. Tick the smaller number:

4

a.



b.



# SECOND TERMINAL EXAMINATION UKG

Total Marks  
Obtained  
out of 25

## Our Little World - EVS

(Model Question Paper)

Time : 2 hrs  
Max. Marks : 25

### 1. Match to its name:

6



Horse



Camel



Giraffe

Butterfly




Ladybird

Cockroach



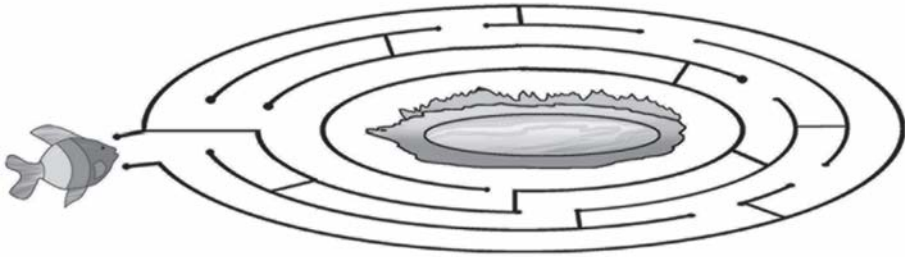
### 2. Use the picture clues and complete the puzzle:

6



3. Take the fish to the pond:

3



4. Where do animals live? Strike out the wrong portions:

4



5. Match to festival:

3



Eid

Christmas

Diwali



6. Tick the correct answer:

3

- a. An insect that can bite us : butterfly  mosquito
- b. An animal that lives in water : starfish  grasshopper
- c. An animal that carries load : camel  tiger

# ANNUAL EXAMINATION UKG

Total Marks  
Obtained  
out of 25

## Our Little World - English

(Model Question Paper)

Time : 2 hrs  
Max. Marks : 25

**1. Name these pictures:**

**5**



b ..... k

..... sh

d ..... ss



..... oo .....

l ..... tt ..... r

**2. Look at each picture and tick the word:**

**4**



blue teddy



tall

pink teddy

short



happy



balloon

sad

ball

**3. Write 'a' or 'an' and name each picture:**

**8**

eg:



a dog ..... ..

4. Complete using 'he', 'she' or 'it':

3

a. This is an ox. .... has a long tail.



b. .... is drawing.



c. .... is reading.



5. Fill in the blanks to complete the answer:

3

( barking                      eating                      skipping )

a. What is the girl doing?

She is .....



b. What is the dog doing?

It is .....



c. What is the boy doing?

He is .....



6. Match the 'he' and 'she' word:

2

Hen

Horse

Queen

Cock

Mare

Brother

Sister

King



# ANNUAL EXAMINATION UKG

Time : 2 hrs  
Max. Marks : 25

Total Marks  
Obtained  
out of 25


## Our Little World - Mathematics

(Model Question Paper)

**1. Do according to instructions:**

**4**

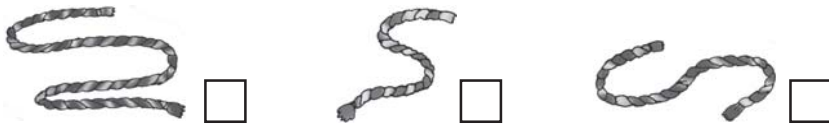
- a. Colour the one that is heavier.      b. Tick the short stick.



- c. Tick the one that can hold most water.



- d. Tick the shortest and cross the longest.



**2. Cross out the number taken away. How many are left?**

**3**

a.  $9 - 3 =$

b.  $7 - 4 =$

c.  $5 - 1 =$

d.  $4 - 2 =$

3. Tick the bigger number:

2



4. Tick the smaller number:

2

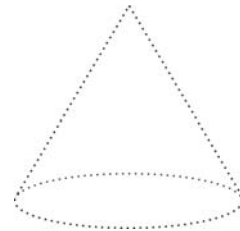




5. Write the number from 71– 100:

6

71							78		
	82							89	
		93							100

6. Give colours to the shapes:



(sphere-blue, cuboid-red, cone-green)

4

7. Match number names to number:

4

hundred

eighty six

twenty nine

fifty five

55

100

86

29

# ANNUAL EXAMINATION UKG

Time : 2 hrs  
Max. Marks : 25

Total Marks  
Obtained  
out of 25

## Our Little World - EVS

(Model Question Paper)

**1. Tick the correct option:**

**6**



ship

boat



chess

carom



well

rain



bus

van



tennis

football



washing clothes

bathing

**2. '✓' Tick the right pictures and 'x' cross out the wrong ones: 5**











**3. Tick two correct options for each:**

**6**

- a. Uses of water : drink  swim  burn fire
- b. Uses of air : swim  breathe  dry clothes
- c. Sources of water : lake  park  river

**4. Select and write the correct word:**

**4**

red tiger rain peacock

- a. .... is the main source of water.
- b. .... is our national bird.
- c. .... light says 'stop'.
- d. .... is our national animal.

**5. Write 'I' for indoor and 'O' for outdoor games:**

**4**

Chess  Hockey  Table Tennis

Ludo  Kho-kho  Cricket

Volley ball  Tennis