

Leaps and bounds

Question Bank

UKG



Publishers Pvt. Ltd.

IX/14-15, Kakkanad-Pallikkara Road, Athani, Kusumagiri.P.O., Kakkanad, Kochi-682 030

Phone : 0484-2429261, 3291869, 8594040422

E-mail: rainbowpublishers@ymail.com

Website: rainbowpublishersindia.com

FIRST TERMINAL EXAMINATION

UKG

Total Marks
Obtained
out of 25

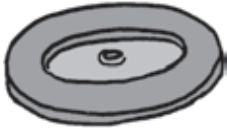
Leaps and bounds - English

(Model Question Paper)

Time : 2 hrs
Max. Marks : 25

1. Read and match words:

2



pen



cat



tap



lid

2. Find the names of the pictures and circle them:

5



w	b	a	g	c	e
b	r	m	n	e	t
n	b	i	n	m	v
v	c	a	p	n	o
d	f	e	h	e	n

3. Name the pictures:

5



4. Answer these questions:

4

a. What is that? ?




b. What is this?



5. Name the things marked:

5



6. Write the small letter for the given capital letters:

4

A B C D E F G H

FIRST TERMINAL EXAMINATION

UKG

Total Marks
Obtained
out of 25

Leaps and bounds - Arithmetic

(Model Question Paper)

Time : 2 hrs
Max. Marks : 25

1. Circle the correct number. Also write the number name:

2+4

a.




1 2 3

b.



3 4 5

c.



5 4 3

d.




6 7 8


2. Tick the set with less things:

3

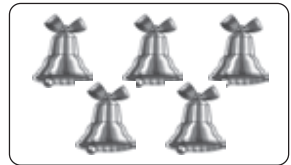



a.


☐

b.


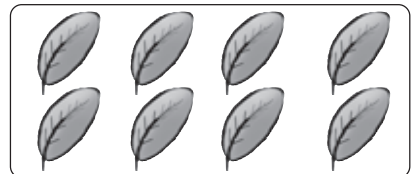
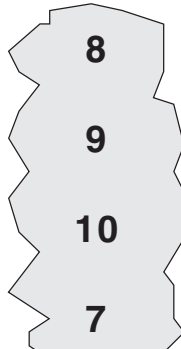
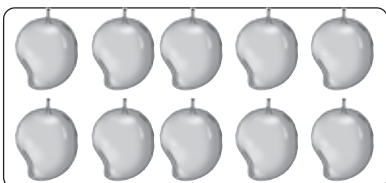
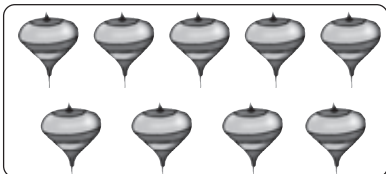

☐

c.


☐

☐

☐

☐


3. Match the number with the collection:

4



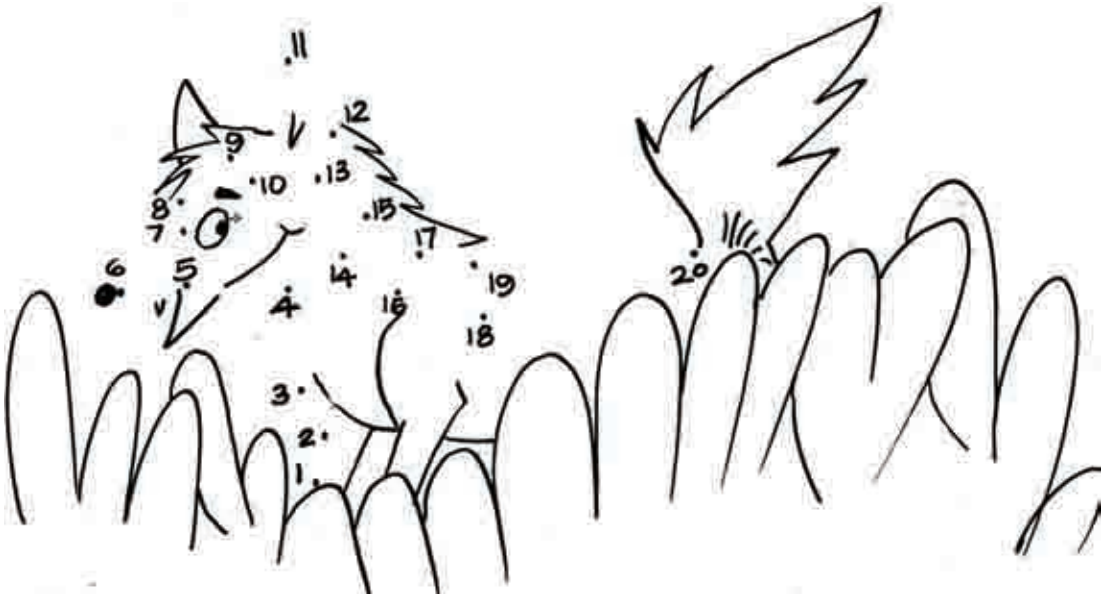
4. Fill in the missing numbers:

3



5. Join the dots from 1 to 20 and colour the picture:

2



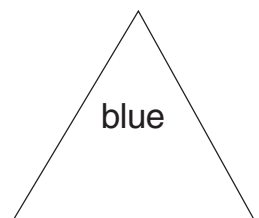
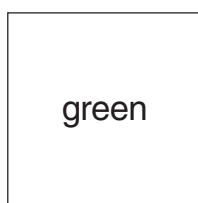
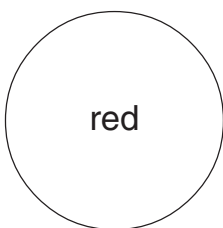
6. Fill up the missing numbers:

4

31					36				
41				45					

7. Colour the shapes:

3



FIRST TERMINAL EXAMINATION

UKG

Total Marks
Obtained
out of 25

Leaps and bounds - GK

(Model Question Paper)

Time : 2 hrs
Max. Marks : 25

1. Circle only part of your body:

3



2. Match each picture to its name and its colour:

8

banana



orange

carrot



yellow

tomato



red

crow



black

3. Answer these questions:

2

a. What is your name?

My name is

b. How old are you?

I am years old.

4. Match A with B:

4

A



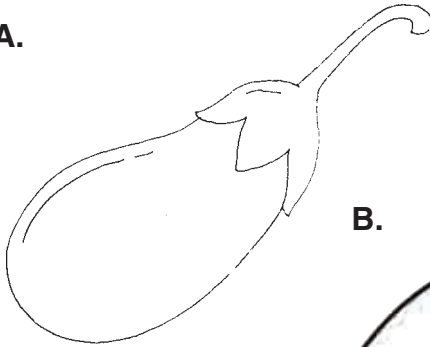
B



5. Give suitable colour:

1+1+2


A.



B.



C.



6. Fill in the missing letters and number the days of the week:

4

a e i o u

Sunday

1

Tu sday

Wednesday

4

Saturday

7

M..... nday

Fr day

Th rsday

SECOND TERMINAL EXAMINATION

Total Marks
Obtained
out of 25

UKG

Leaps and bounds - English

(Model Question Paper)

Time : 2 hrs
Max. Marks : 25

1. Fill in the missing letters:

2

a)

l			f
---	--	--	---

b)

c		k	
---	--	---	--

c)

c	r		
---	---	--	--

d)

b			d
---	--	--	---



2. Name the objects using 'and':

4



3. Fill in the blanks with 'in' or 'on':

2



a) a cat.....a bed.



c) a dog.....a hut.



b) a mug.....a tub.




d) a pen.....a cup.


4. Use 'a' or 'an': 4

- a)orange b)hat c)star d)ant

5. Correct the jumbled words: 2

a. 

a	o	b	t
---	---	---	---


b. 


n	i	l	o
---	---	---	---

6. Write the plural form: 2

pen - box -

7. Fill in the blanks with 'is' or 'are': 2

a)  This a ball.

b) Those books. 

c)  These trees.

d) That a mug. 

8. Fill in the blanks with before/after: 3

a. Monday comes Tuesday.

b. April comes March.

c. Ten comes eleven.

9. Answer the following: 4

a)  What is this ?

.....

b) What is that ?



.....

SECOND TERMINAL EXAMINATION

UKG

Total Marks
Obtained
out of 25

Leaps and bounds - Arithmetic

(Model Question Paper)

Time : 2 hrs
Max. Marks : 25

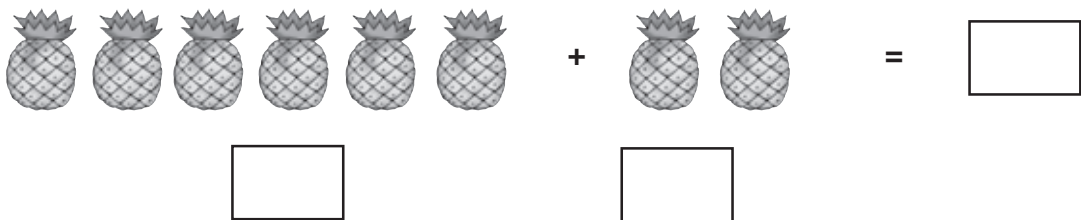
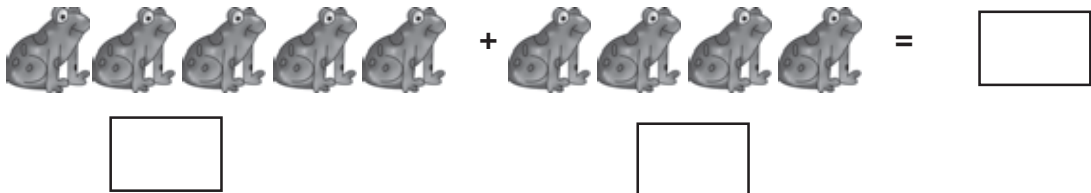

1. Fill in the missing numbers:

4

61		63		65	66		68		70
71	72		74	75		77	78		
81		83	84	85		87		89	
91		93		95	96		98		100

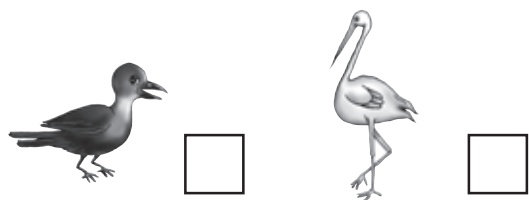

2. Count the pictures and write in each box:

3



3. a) Tick the shorter candle:

b) Tick the bird with the longer beak: 2



4. Count and write the number and name:

6



=

= t



=

= t



=

= s



=

= f v.....

5. Which number comes before and after?

4

<input type="text"/>	11	<input type="text"/>
----------------------	----	----------------------

<input type="text"/>	14	<input type="text"/>
----------------------	----	----------------------

<input type="text"/>	17	<input type="text"/>
----------------------	----	----------------------

<input type="text"/>	20	<input type="text"/>
----------------------	----	----------------------

6. Match the following:

2

Sixteen

8

Nineteen

25

19

Eight

16

Twenty five

7. Add:

4

$$7 + 1 = \dots\dots\dots$$

$$8 + 2 = \dots\dots\dots$$

$$2 + 4 = \dots\dots\dots$$

$$6 + 3 = \dots\dots\dots$$

SECOND TERMINAL EXAMINATION

UKG

Total Marks
Obtained
out of 25

Leaps and bounds - GK

(Model Question Paper)

Time : 2 hrs
Max. Marks : 25

1. Look at the pictures and tick two suitable words:

4



Santa Claus

☐

Diwali

☐

Christmas

☐

Diyas

☐


Hospital

☐

Post office

☐

Doctor

☐

Postman

☐

2. Find them:

5



rede

d e

--	--	--	--



illy

l i

--	--	--	--



rabe

b e

--	--	--	--



barc

c r

--	--	--	--



grof

f r

--	--	--	--

3. Tick the correct option:

5

- a. The colour of an elephant is black ☐ red ☐.
- b. Hen ☐ Cow ☐ gives us milk.
- c. Bird ☐ Eel ☐ lives in water.
- d. January ☐ June ☐ is the first month of the year.
- e. Lion lives on land ☐ in water ☐.

4. See the pictures and write the names:

5

2 G

1 L


3 S


N


4 F


L


5 W

1. 

2. 

5. 

3. 

4. 

H

L

5. Name the following (all words have 4 letters):

4

- a. A bird that gives us eggs.
- b. An animal that lives in water.
- c. A flower that has a good smell.
- d. The sixth month of the year.

D

F

R

J

6. How many months are there in a year? Name the fifth month:

2

There are months in a year.

The fifth month is [April / March / May]

ANNUAL EXAMINATION

UKG

Leaps and bounds - English

(Model Question Paper)

Total Marks
Obtained
out of 25

Time : 2 hrs
Max. Marks : 25

1. Fill up the blanks with 'his / her/ my':

3

a. I am Arun. This is car.



b. He is having bath.



c. She is combing hair.



2. Use 'behind' / 'in front of' and fill in the blanks:

3

a. The ox is the cart.



b. The tree is the house.



c. The girl is sitting the boy.



3. Answer the following questions with 'Yes, it is' or 'No, it is not':

3

a. Is that a book?

.....



b. Is this a frog?



.....

c. Is that a kite?

.....



4. Write the opposites:

3

out x

down x

small x

5. Use has / have and fill up the blanks:

2

a. I two sisters.

b. She a red ribbon.

c. They a small dog.

d. He a car.

6. Write 2 sentences starting with 'I am':

4

a. I am

b. I am

7. Match sentence to picture:

3



A crow and a sparrow are friends.

They are fighting.



They are cooking dinner.

They are flying in the sky.



8. Answer the following in a sentence:

4

a. When do you wake up?

.....
.....

b. Where do you live?

.....
.....

ANNUAL EXAMINATION

UKG

Total Marks
Obtained
out of 25

Leaps and bounds - Arithmetic

(Model Question Paper)

Time : 2 hrs
Max. Marks : 25

1. Write the number that comes in between: 3

- a. 71 73 b. 84 86 c. 89 91
d. 18 20 e. 26 28 f. 32 34

2. Write the numbers / number names backwards: 3

- | | |
|--|--|
| 20 – twenty

..... – nineteen

18 –

..... – seventeen | – sixteen

15 –

..... – fourteen |
|--|--|

3. Write <, > or = in the boxes: 3

- a. 89 100 b. 97 79 c. 40 40
d. 84 94 e. 61 91 f. 98 98

4. Do these sums: 4

6	4	2	5
+ 1	+ 5	+ 2	– 2
=====	=====	=====	=====

5. Write in: 3

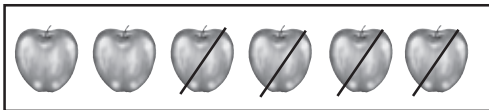
- a. Ascending order from 4 to 9.
- b. Descending order from 8 to 3.

6. Look at the pictures and write the answers:

4



$$5 - 2 = \boxed{}$$



$$6 - 4 = \boxed{}$$



$$8 - 3 = \boxed{}$$



$$8 - 2 = \boxed{}$$

7. Write the time:

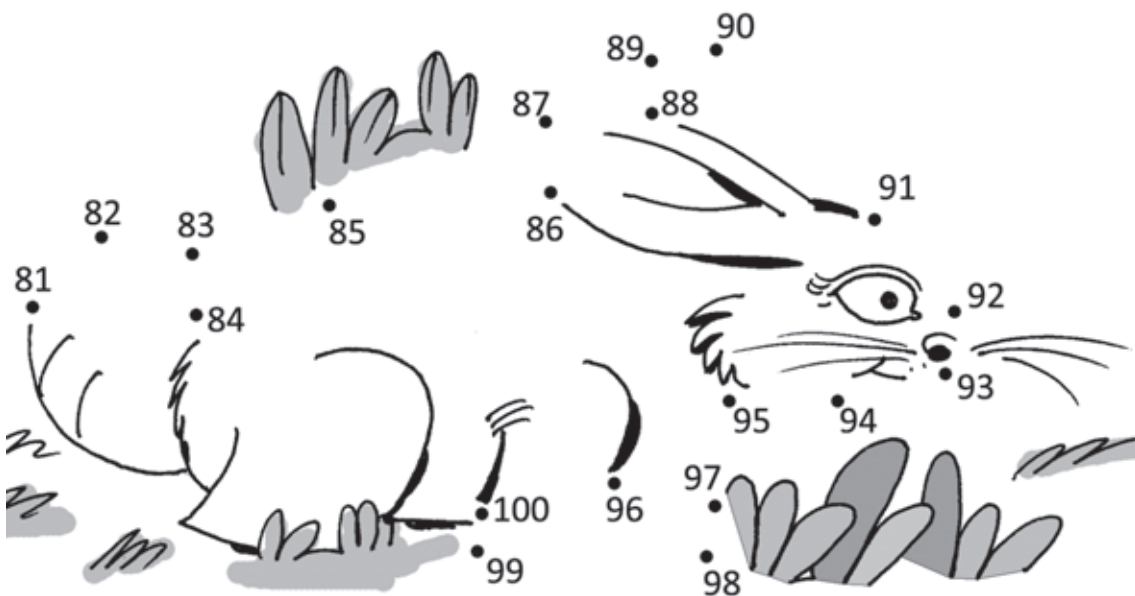
2





8. Join the dots from 81 to 100 and find who is hiding:

3



ANNUAL EXAMINATION

UKG

Leaps and bounds - GK

(Model Question Paper)

Total Marks
Obtained
out of 25

Time : 2 hrs
Max. Marks : 25

1. Circle the names of all these pictures in the grid given below:

5



G	D	U	C	K	K
C	A	R	G	D	C
L	F	R	B	U	S
A	N	T	V	D	R
T	R	E	E	W	L



2. Name the following:

5

- One living thing.
- One non-living thing.
- One vehicle that travels in water.
- Our national bird.
- A bird that gives us eggs.

3. Which is good? Which is bad? Put '✓' for good and 'x' for bad habits:

4

☐

Thank you.

☐

Hello!

☐

☐

4. Match the two columns:

4

teacher

postman

grasshopper

ostrich

insect

teaches

a tall bird

letters

5. Put '✓' for true statements:

5

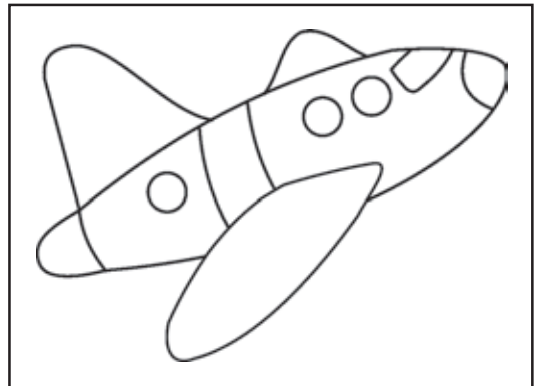
- a. Birds have no teeth.
- b. Usually insects have six legs.
- c. Plant is a non-living thing.
- d. All living things grow.
- e. Lemon is sour.

☐
☐
☐
☐
☐

6. Who am I? Name me and colour my picture:

2

- a. I fly in the sky,
but I am not a bird.
People travel in me.
AER PL NE



- b. I am a bird.
I have big round eyes.
I came out at night.
O

